




## 01.06.20 P2 Time Worksheet



### Revision (to test your memory!)

So remember way back to Primary 1 and the very first week of Primary 2, we looked at o'clock times.

On an analogue clock (the circle one with the hands), we know it is o'clock when the “**big hand**” - the longer hand **points to the number 12**.

The “**little hand**” – the shorter one, **tells us the hour** it is. So in the following clock:



The big hand is at the 12 (o'clock) and the little hand is pointing to the 8, so the time is 8 o'clock.

This is written as 8:00 or 8.00 in digital time (the hour number coming first then the minutes coming after the colon (:)) or dot (.).

Remember we put **am** if it is in the **morning** i.e. 8:00am is 8 in the morning – breakfast time.

Whereas **pm** means it is **afternoon/evening/night** time so 8:00pm is 8 at night – bedtime!

### Questions: WALT tell the time using analogue clocks.(MNU 1-10a)


**What time is it on the following clocks and how do you write it in analogue (o'clock) and digital (0:00)?**



morning



afternoon




morning



night

Challenge one:



evening

Remember the rhyme? Can you fill in the gaps?

? days hath September, April, June and November

All the rest have 31, except ?

Which has 28 days clear and 29 each leap year.

# January

Sunday	Monday	Tuesday	Wednesday	Thursday	Friday	Saturday
				1	2	3
4	5	6	7	8	9	10
11	12	13	14	15	16	17
18	19	20	21	22	23	24
25	26	27	28	29	30	31

The above calendar page shows the month of January (not this year). The days of the week are along the top. (WALT use a calendar to get information. MNU 1-10b)

1. What day of the week is January 1<sup>st</sup>?
2. How many Thursdays are there in January? (Hint: go to the Thursday at the top of the page, then count down all the Thursday boxes which have a number in them.)
3. What day of the week is 19<sup>th</sup> January? (Hint: go to the box with 19 in it then go straight up to the day at the top.)
4. How many Sundays are in January?
5. How many days are in January in total?
6. What day of the week is the last day of January?
7. Robert Burns Day is 25<sup>th</sup> January, what day of the week is it?
8. How many Tuesdays are in January?
9. What is the month that comes after January?
10. Which month comes before January?

Have you got a calendar in your home? Have a look at it and talk about it to someone. Ask each other questions about it.