

TRIANGLES and SQUARES WORKSHEET 25.05.20

ANSWERS

WALT: use strategies to add and subtract numbers. (MNU 1-03a)

Adding

1. $7 + 4 = 11$

2. $5 + 3 = 8$

3. $3 + 8 = 11$

4. $9 + 5 = 14$

5. $2 + 11 = 13$

6. $4 + 8 = 12$

7. $13 + 5 = 18$

8. $6 + 14 = 20$

9. $12 + 2 = 14$

10. $10 + 7 = 17$

Challenge:

1. $19 + 3 = 22$

2. $29 + 3 = 32$

3. $45 + 6 = 51$

4. $7 + 53 = 60$

5. $34 + 7 = 41$

Subtraction

1. $10 - 3 = 7$
2. $8 - 2 = 6$
3. $9 - 5 = 4$
4. $11 - 3 = 8$
5. $13 - 4 = 9$
6. $19 - 9 = 10$
7. $18 - 5 = 13$
8. $21 - 2 = 19$
9. $20 - 5 = 15$
10. $17 - 0 = 17$

Challenge:

1. $25 - 6 = 19$
2. $23 - 3 = 20$
3. $34 - 5 = 29$
4. $83 - 4 = 79$
5. $75 - 7 = 68$

Put the following numbers in order from **smallest** to **biggest**.

- | | | | | |
|----|----|----|----|----|
| A. | 19 | 25 | 28 | 32 |
| B. | 17 | 22 | 24 | 31 |

C.	35	38	39	42
D.	34	54	64	74
E.	29	45	90	99

Put the following numbers in order from **biggest** to smallest.


A.	23	18	11	7
B.	42	36	25	21
C.	54	50	45	44
D.	93	73	63	53
E.	90	88	82	80

Worded problems:





1. George was out for a walk and saw 5 squirrels. Michalina saw 6 squirrels on her walk and Zuzanna saw 4 squirrels in her garden. How many squirrels did they see altogether?


$$5 + 6 + 4 = 15$$

2.  Hannah has 8 rainbow drawings in the window. Her sister put another 3 in the window. Her mum was a spoilsport and took 4 away 😞. How many rainbow drawings are now in the window?

$$8 + 3 = 11 \quad 11 - 4 = 7 \text{ rainbow drawings}$$

3.  Charlie found 8 snails in his garden. His brother found 4 more snails. How many did they find in total? $8 + 4 = 12$

4.  Harrison made 9 Sporkys at home. His Mum made another 5. How many Sporkys did they make altogether? $9 + 5 = 14$

5.  Ola had 13 chalks but her sister took 4 away. How many chalks does Ola have left?

$$13 - 4 = 9$$








6. Kaleb has a pet panda. He gave it 22 bamboo sticks to eat. The panda ate 6 of them. How many bamboo sticks were left? $22 - 6 = 16$



7. Sophie drew 6 unicorns, Tiana drew 3 and Ruby drew 4 unicorns. How many unicorns did they draw in total? $6 + 3 + 4 = 13$

www.solveemoji.com - 1 Junior
SOLUTIONS, PUZZLES & LEADERBOARDS ONLINE

	+		=	6
	+		=	8
	+		=	9
	+		=	?

Puzzle ID: 37755 

8.

2 red drawing pins = 6, so one drawing pin must be half of 6 which is 3; $3 + 3 = 6$

A drawing pin + a pen = 8 ($3 + ? = 8$; $3 + 5 = 8$)

A ruler and a pen = 9 ($? + 5 = 9$; $4 + 5 = 9$)

A drawing pin (3) + a ruler (4) = $3 + 4 = 7$

Congratulations if you managed to work that one out!