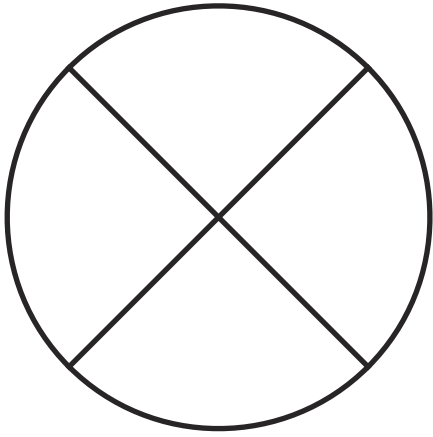
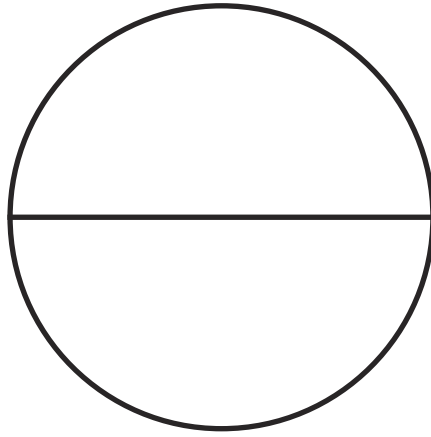


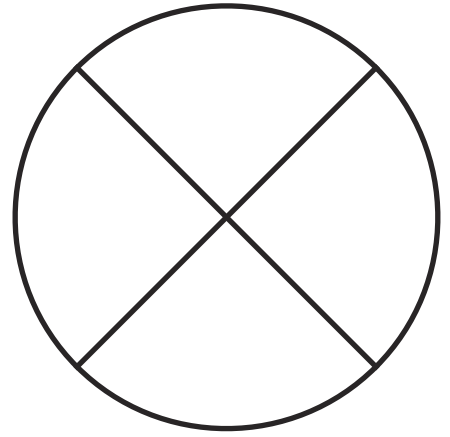
Read and Colour the Fractions



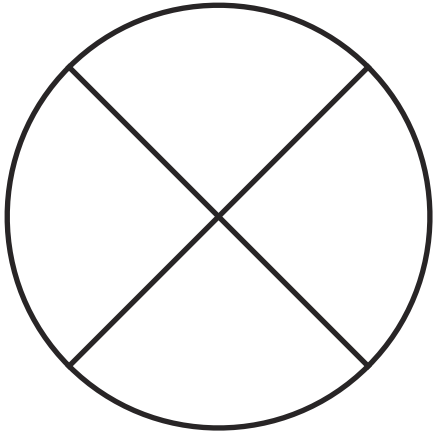
one quarter



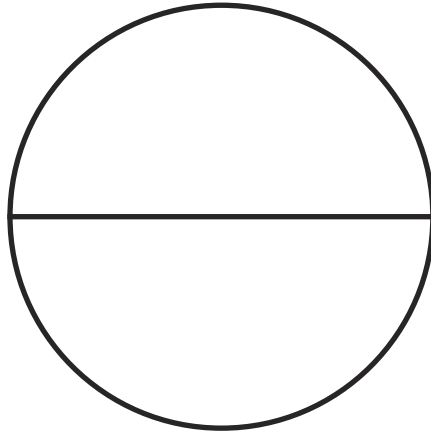
one half



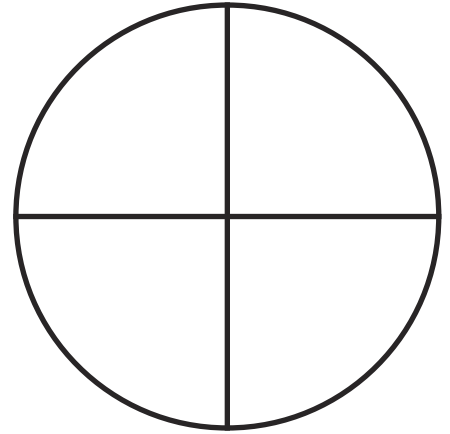
three quarters



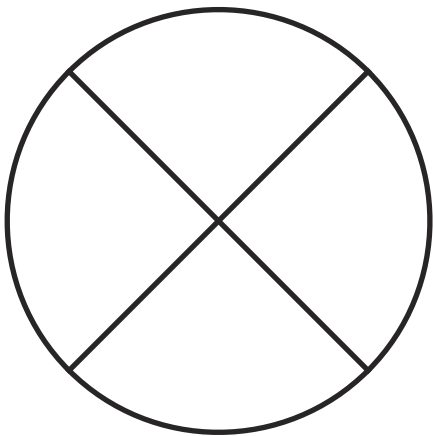
whole



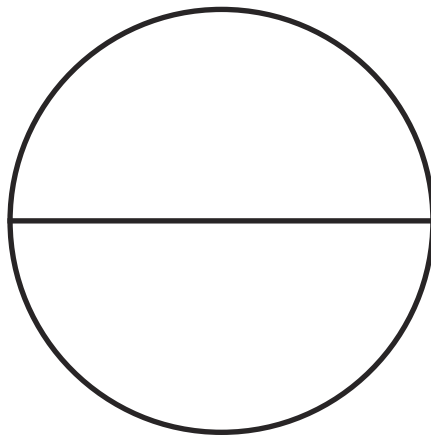
one half



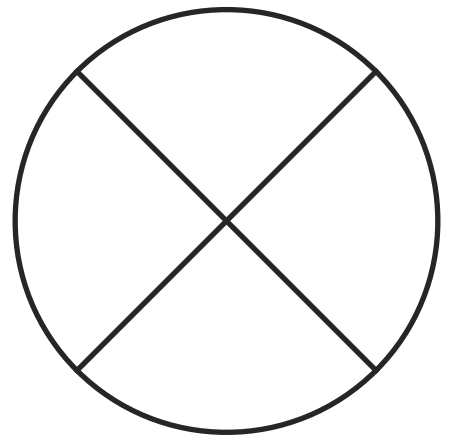
one quarter



$\frac{1}{4}$



$\frac{1}{2}$



$\frac{3}{4}$

Halves and Quarters Fractions

Find the fractions of these numbers. Draw pictures to show your thinking.

Here is an example:

| | |
|-------------------------|--|
| $\frac{1}{2}$ of 12 = 6 |  |
|-------------------------|--|

Now it's your turn!

$\frac{1}{2}$ of 8 =

| |
|--|
| |
| |
| |
| |

$\frac{1}{2}$ of 14 =

| |
|--|
| |
| |
| |
| |

$\frac{1}{4}$ of 12 =

$\frac{1}{2}$ of 18 =

$\frac{1}{4}$ of 24 =

$\frac{1}{4}$ of 32 =

$\frac{1}{4}$ of 20 =

$\frac{1}{2}$ of 24 =