

# Fraction Word Problems

## Challenge Cards



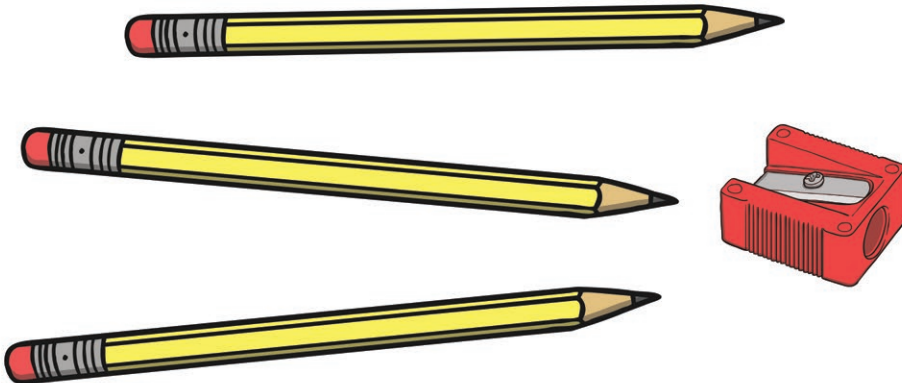
### Fraction Word Problems

1. Janik invited 20 friends to his birthday. A quarter of them were girls. How many were boys?



### Fraction Word Problems

2. In a box of 24 pencils, half were sharp. How many weren't sharp?




### Fraction Word Problems

3. If it took Beth 15 minutes to walk  $\frac{3}{4}$  of the way to school, how long would the whole journey take?



Fraction Word Problems

4. Fatim picked 15 strawberries but ate a third of them on the way home. How many did he have left?



Fraction Word Problems

5. Eva says, " $\frac{1}{2}$  of 20 is more than a  $\frac{3}{4}$  of 16." Is she right?



Fraction Word Problems

6. The class want to play football. There are 30 players and 5 players on a team. How many teams can they have?



Fraction Word Problems

7. James collected cards but chose to swap half of them. If he had 22 cards, how many did he swap?



Fraction Word Problems

8. "My brother always gets the bigger half!" moaned Greg. Is this possible?



twinkl.co.uk

Fraction Word Problems

9. A shop was selling flags. They had 18 altogether. A third of them were French and the rest were American. How many American flags were there?



twinkl.co.uk

Fraction Word Problems

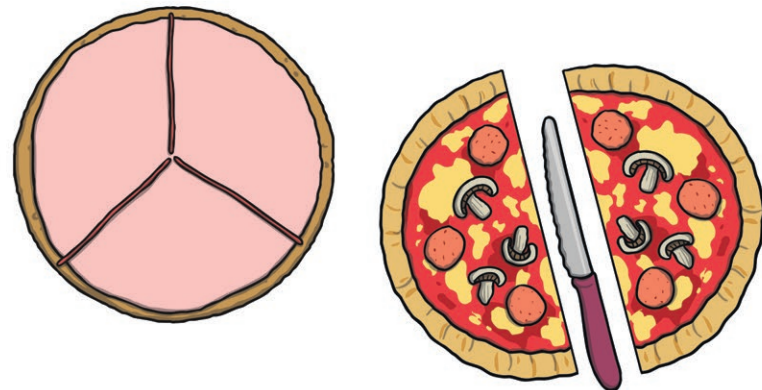
10. Lorna got £20 for her birthday. She spent £10 on a DVD, £2 on a magazine and £3 on a football. What fraction of her birthday money did she have left?



twinkl.co.uk

Fraction Word Problems


11. A third ( $\frac{1}{3}$ ) is bigger than a ( $\frac{1}{2}$ ). True or false?



twinkl.co.uk

### Fraction Word Problems

12. A hotel has 40 rooms. There are 10 rooms on each floor. What fraction of the hotel's rooms are on each floor?



twinkl.co.uk

# Fraction Word Problems

## Answers

1. 15 boys
2. 12 pencils
3. 20 minutes
4. 10 strawberries
5. No. 12 is more than 10
6. 6 teams.
7. 11 cards
8. No. Halves are always equal in size.
9. 12 flags
10.  $\frac{1}{4}$
11. False. A  $\frac{1}{2}$  is bigger than a  $\frac{1}{3}$
12.  $\frac{1}{4}$