



# Tiling 2D Shapes

## Challenge Cards




Tiling 2D Shapes

1. Which of these shapes can be tiled?




Tiling 2D Shapes

2. Take a piece of squared paper and tile a portion of it with the following 2D shape.




Tiling 2D Shapes

3. Can you tile a space with a regular hexagon?  
Give it a go to prove your answer.




Tiling 2D Shapes

4. Can you tile a space using these two shapes together?




Tiling 2D Shapes

5. Can you tile a space using these two shapes together? Take a piece of squared paper and give it a go!




Tiling 2D Shapes

6. Create a tiling pattern using a kite shape.



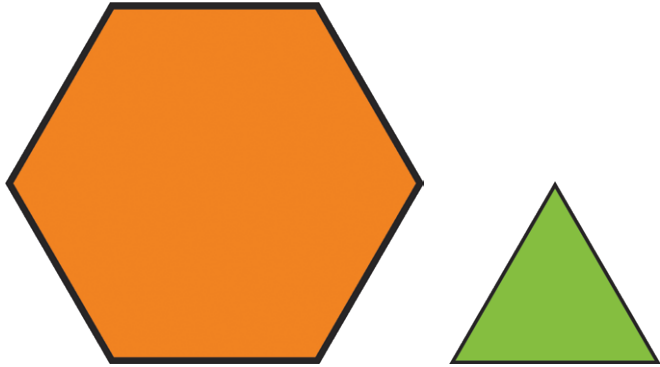
Tiling 2D Shapes

7. Can you create a tiling pattern using this shape?



Tiling 2D Shapes

8. Can you tile a space using these two shapes together?



Tiling 2D Shapes

9. Which of these 2D shapes can be tiled?

