

Fractions of a set of objects (2)

1 Draw counters in the bar models to help you complete each number sentence.

a) $\frac{2}{3}$ of 15 =

--	--	--

b) $\frac{3}{4}$ of 8 =

--	--	--	--

c) $\frac{2}{5}$ of 20 =

--	--	--	--	--

2 Match the questions and answers.

$\frac{2}{3}$ of 9 = ?

9

$\frac{3}{5}$ of 15 = ?

6


$\frac{5}{6}$ of 12 = ?

15

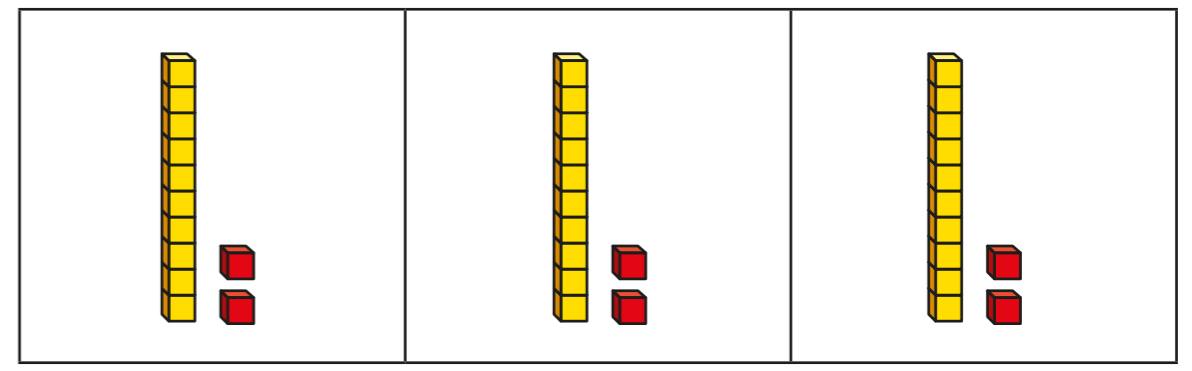
$\frac{3}{4}$ of 20 = ?

10

3 What is $\frac{6}{6}$ of 18?
How do you know?



4 Brett uses a bar model and base 10 to find $\frac{2}{3}$ of 36



Use Brett's method to complete the number sentences.

a) $\frac{2}{3}$ of 63 =

b) $\frac{3}{4}$ of 48 =

c) $\frac{3}{4}$ of 92 =

5 Kim uses a bar model and place value counters to find $\frac{2}{3}$ of 36



Use Kim's method to complete the number sentences.

a) $\frac{2}{3}$ of 96 =

b) $\frac{3}{5}$ of 60 =

c) $\frac{3}{4}$ of 52 =



6 Complete the number sentences.

a) $\frac{2}{3}$ of = 30

b) $\frac{3}{4}$ of = 30

c) $\frac{5}{6}$ of = 30

7



Tommy

To find $\frac{3}{4}$ of 12,
you divide by 4 and then
multiply the answer by 3

To find $\frac{3}{4}$ of 12,
you divide by 3 and then
multiply the answer by 4




Dexter

Who is correct? _____

How do you know? Show your working.



8 Dora, Whitney and Ron each find a fraction of 24 using counters.



Dora

I have $\frac{5}{6}$ of 24

I have $\frac{2}{3}$ of 24



Whitney



Ron

I have 18 counters.

a) Who has the most counters? Show your workings.

b) How many more counters does Dora have than Whitney?

9 Write fractions to make the statements correct.

of 36 < 18

of 36 = 18

of 36 > 18

How many different answers can you find for each?

Compare with a partner.

