

Name : \_\_\_\_\_

## Division Sentence - Arrays

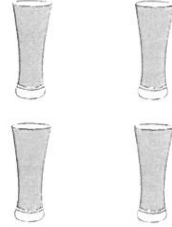
Sheet 1

Write a division sentence to describe each array.


1)



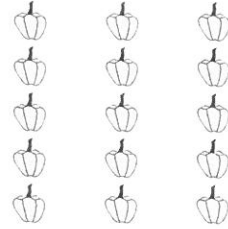
2)



3)




4)



5)




6)



7)



8)



Name : \_\_\_\_\_

## Division - Arrays

Sheet 1

- 1) As part of his school activity, Liam pasted a bunch of shirt buttons on a chart. If he had 30 buttons pasted equally in 5 rows, how many buttons did each row contain?

\_\_\_\_\_

- 2) In the bulletin board at her dad's office, Emily saw 12 thumbtacks arranged in 6 columns of equal numbers. How many thumbtacks did each column consist of?

\_\_\_\_\_

- 3) Charles arranged 12 pebbles in 4 rows. If each row has an equal number of pebbles, how many pebbles are in each row?

\_\_\_\_\_

- 4) After the class hours, the school guard locks all the 8 classrooms. He hangs the keys on a key holder equally in 2 columns. How many keys are in each column?

\_\_\_\_\_

- 5) Mary arranged 20 roses in 4 columns, each column presenting a distinct color. She collected an equal number of red, yellow, pink and orange roses. How many red roses were there?

\_\_\_\_\_