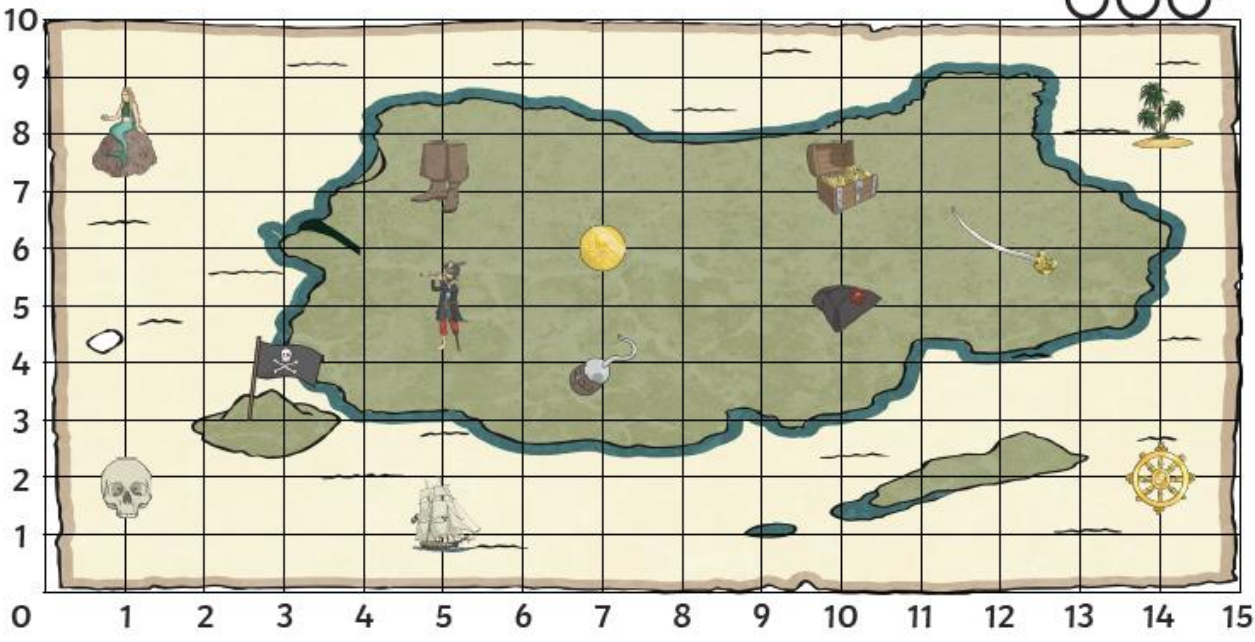




Pirate Map Coordinates






I can read, write and plot coordinates in the first quadrant.



What is at these coordinates on the pirate map?

- (5,5) = _____
- (7,6) = _____
- (12,6) = _____
- (10,7) = _____
- (1,8) = _____

Write the coordinate of these places on the pirate map:

-  = (,)
-  = (,)
-  = (,)
-  = (,)
-  = (,)

Plot these coordinates on the grid using a cross.

- (2,1)
- (14,5)
- (9,5)
- (4,9)
- (8,10)