

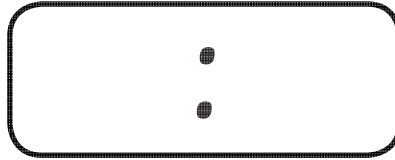
Digital Time – O’Clock

What is the time?

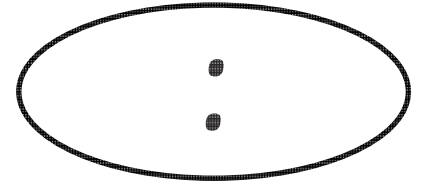
Write digits in the clocks to show the time. The first one has been done for you.




2 o'clock



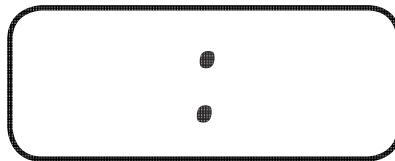
5 o'clock



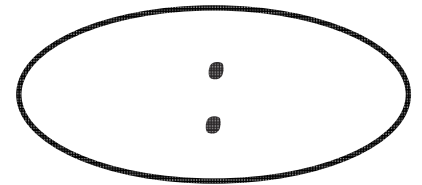
10 o'clock




8 o'clock



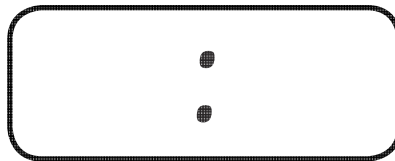
12 o'clock



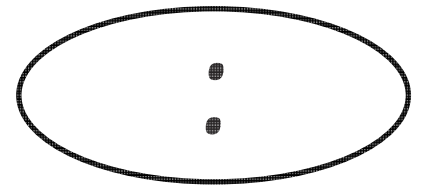
3 o'clock



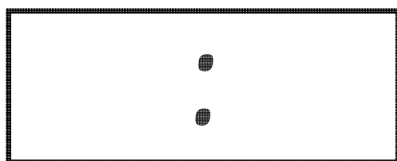
9 o'clock



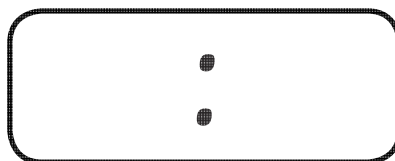
7 o'clock



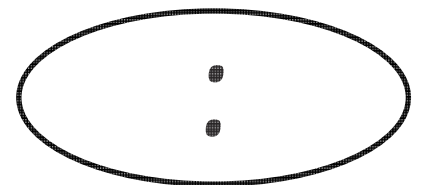
1 o'clock



4 o'clock



11 o'clock



6 o'clock

Digital Time – O’Clock Answers

What is the time?

Write digits in the clocks to show the time. The first one has been done for you.

02:00

2 o'clock

05:00

5 o'clock

10:00

10 o'clock

08:00

8 o'clock

12:00

12 o'clock

03:00

3 o'clock

09:00

9 o'clock

07:00

7 o'clock

01:00

1 o'clock

04:00

4 o'clock

11:00

11 o'clock

06:00

6 o'clock