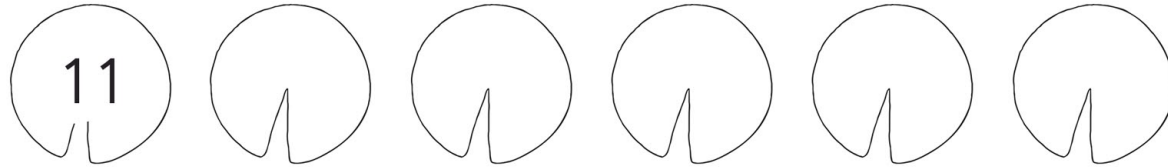


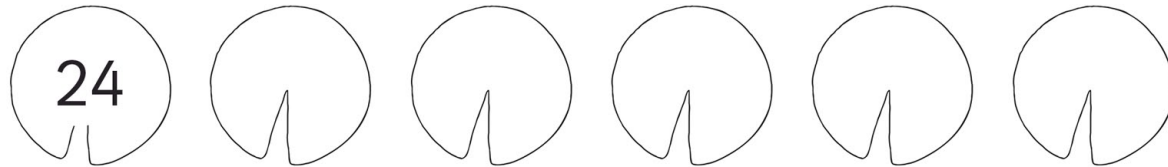
Lily Pad Numbers – Counting in 2s, 5s and 10s

Complete the sequence on the lily pads. Make sure you follow the rule!

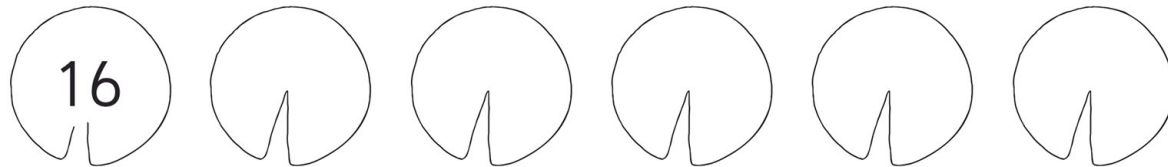
1. Add 2 each time.



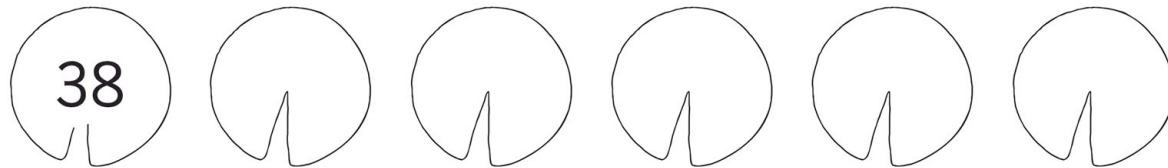
2. Add 2 each time.



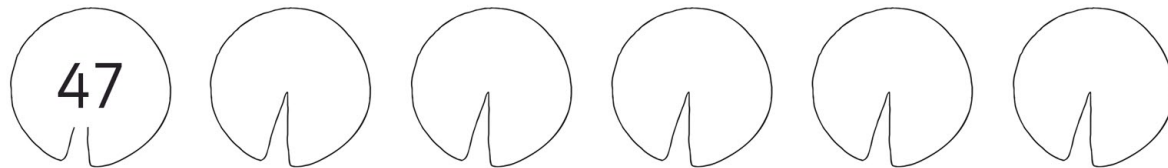
3. Add 2 each time.



4. Add 2 each time.



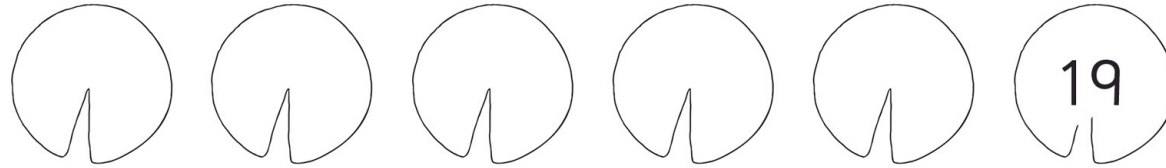
5. Add 2 each time.



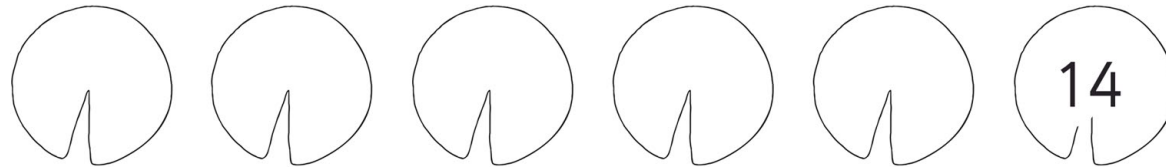
Lily Pad Numbers – Counting in 2s, 5s and 10s

Complete the sequence on the lily pads. Make sure you follow the rule!

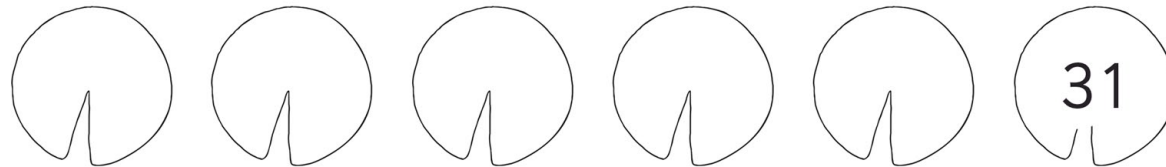
6. Take away 2 each time.



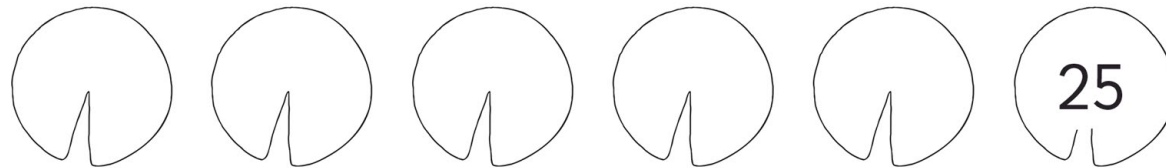
7. Take away 2 each time.



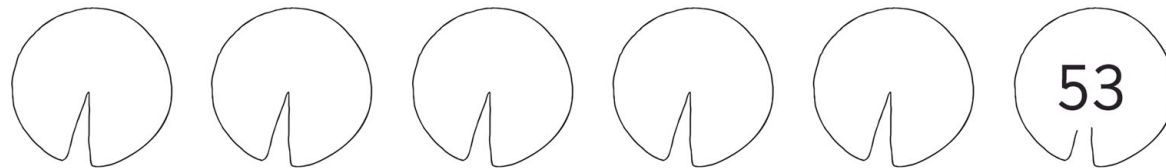
8. Take away 2 each time.



9. Take away 2 each time.



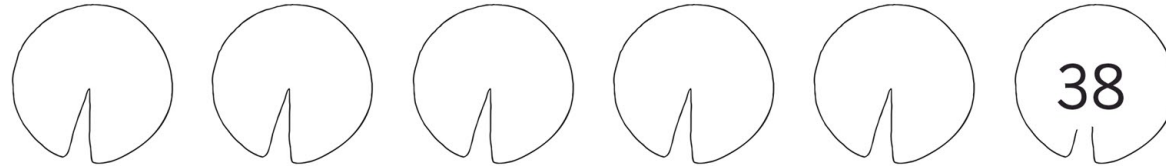
10. Take away 2 each time.



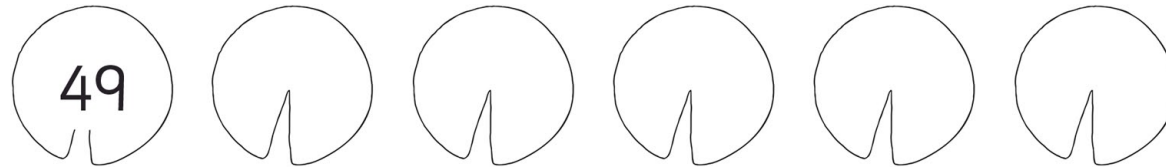
Lily Pad Numbers – Counting in 2s, 5s and 10s

Complete the sequence on the lily pads. Make sure you follow the rule!

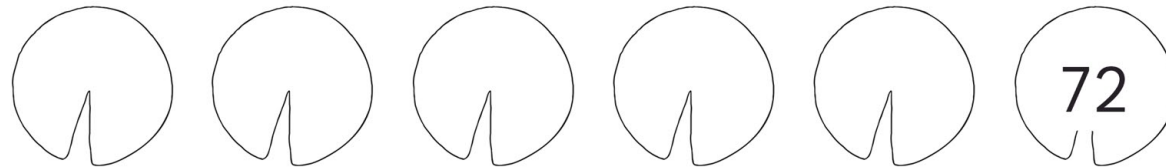
11. Take away 2 each time.



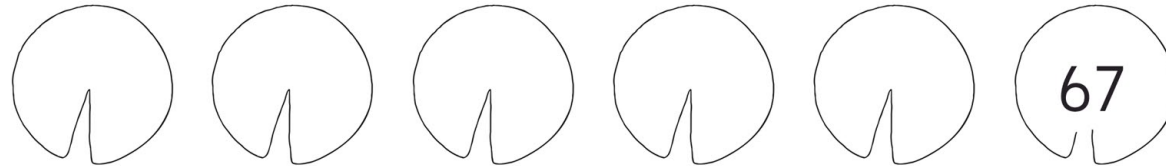
12. Add 2 each time.



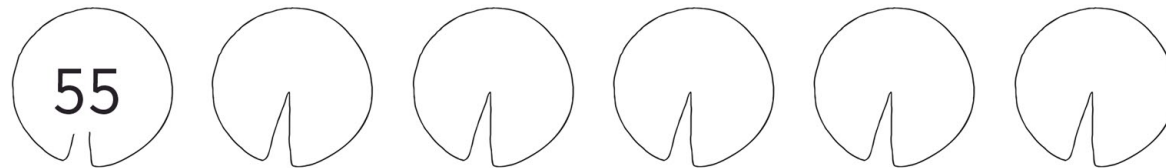
13. Take away 2 each time.



14. Take away 2 each time.



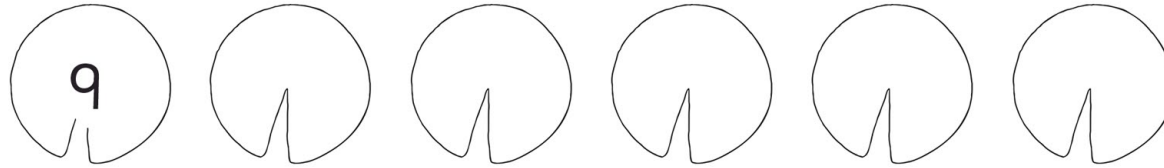
15. Add 2 each time.



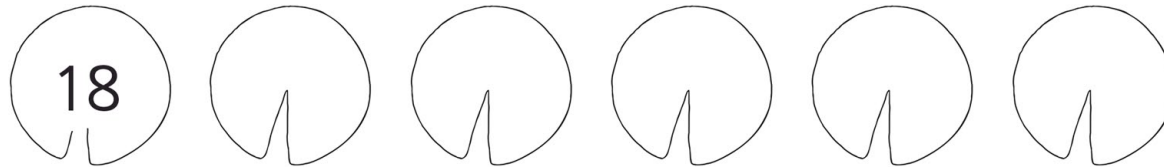
Lily Pad Numbers – Counting in 2s, 5s and 10s

Complete the sequence on the lily pads. Make sure you follow the rule!

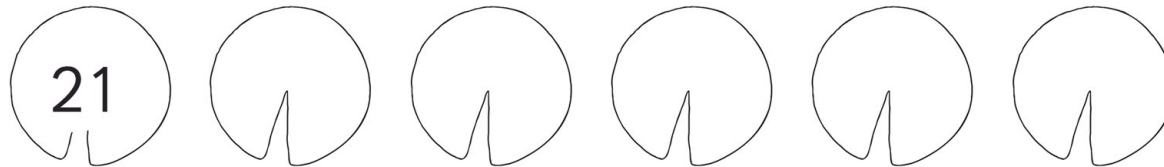
16. Add 5 each time.



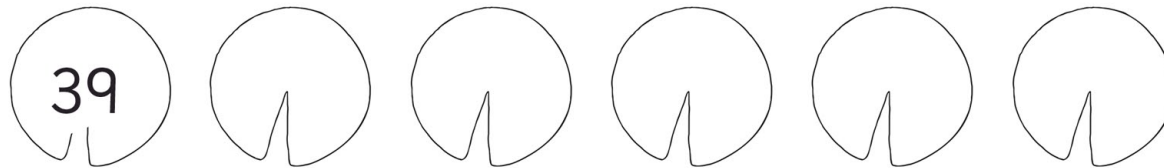
17. Add 5 each time.



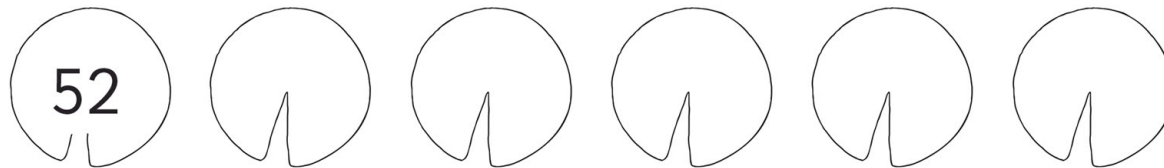
18. Add 5 each time.



19. Add 5 each time.



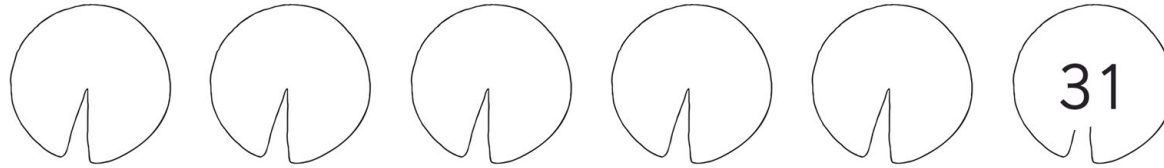
20. Add 5 each time.



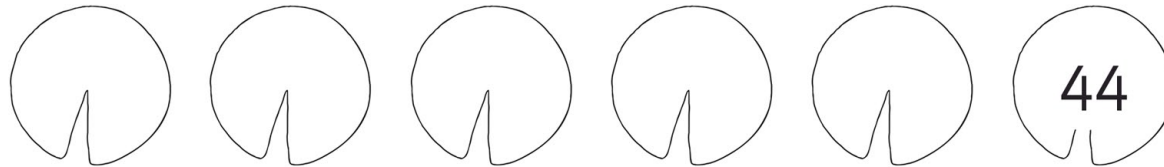
Lily Pad Numbers – Counting in 2s, 5s and 10s

Complete the sequence on the lily pads. Make sure you follow the rule!

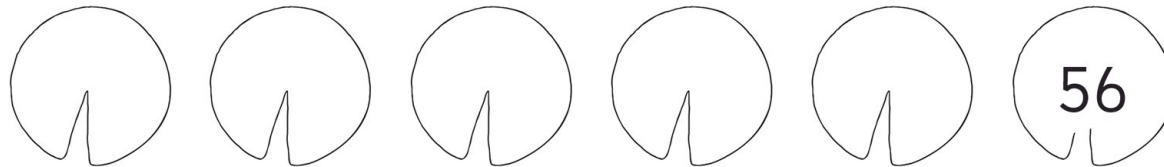
21. Take away 5 each time.



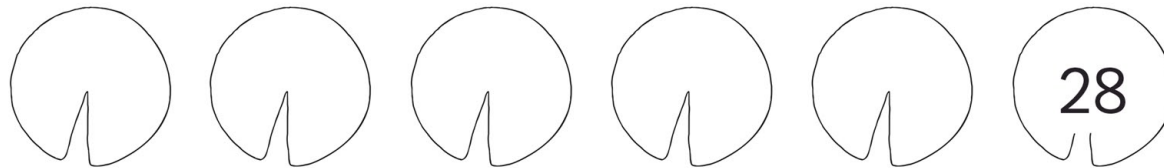
22. Take away 5 each time.



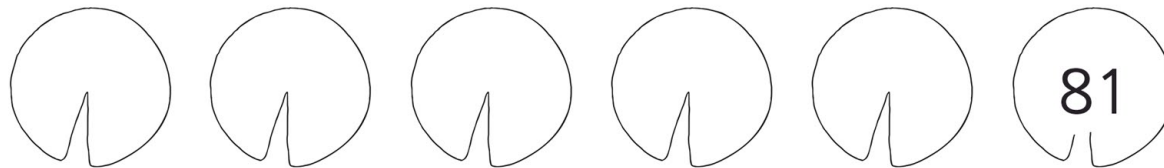
23. Take away 5 each time.



24. Take away 5 each time.



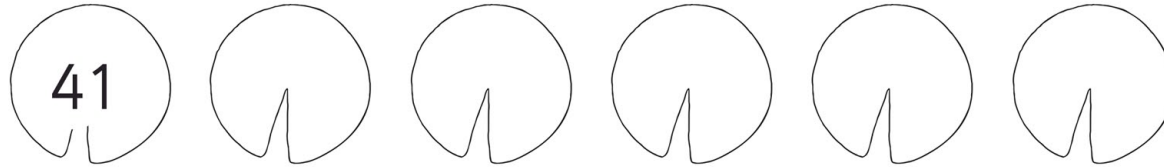
25. Take away 5 each time.



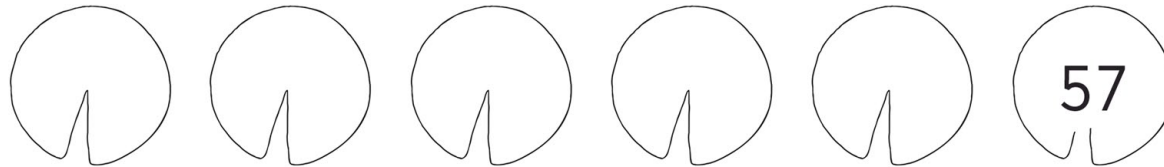
Lily Pad Numbers – Counting in 2s, 5s and 10s

Complete the sequence on the lily pads. Make sure you follow the rule!

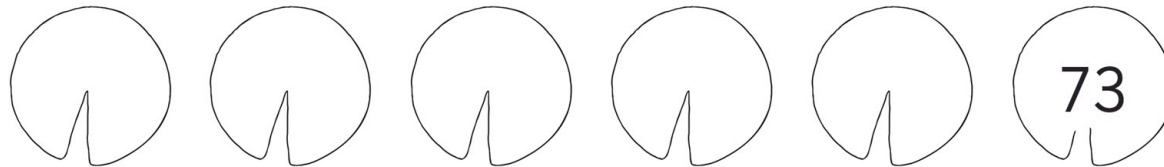
26. Add 5 each time.



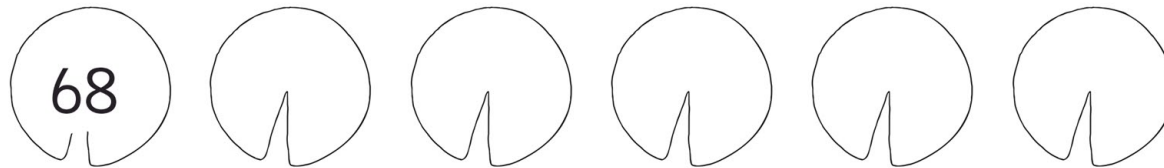
27. Take away 5 each time.



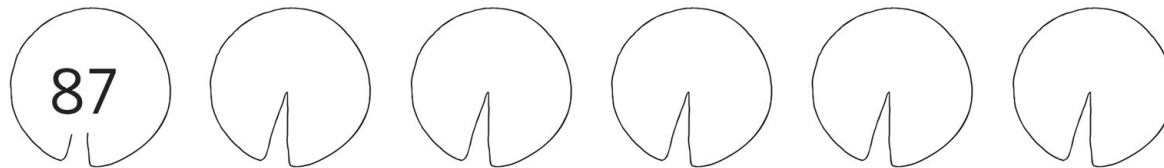
28. Take away 5 each time.



29. Add 5 each time.



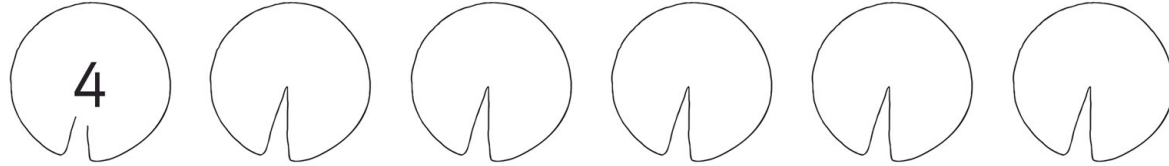
30. Add 5 each time.



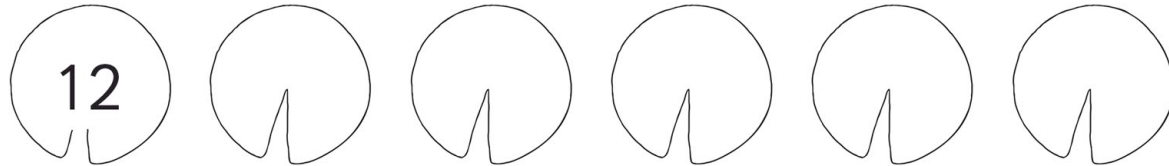
Lily Pad Numbers – Counting in 2s, 5s and 10s

Complete the sequence on the lily pads. Make sure you follow the rule!

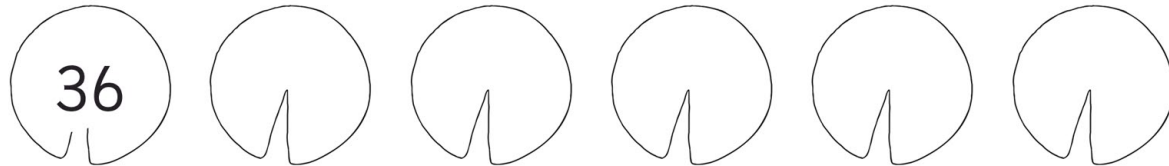
31. Add 10 each time.



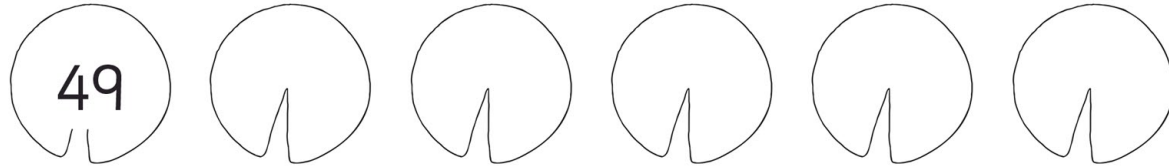
32. Add 10 each time.



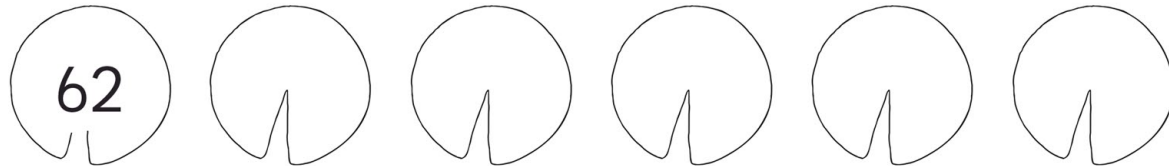
33. Add 10 each time.



34. Add 10 each time.



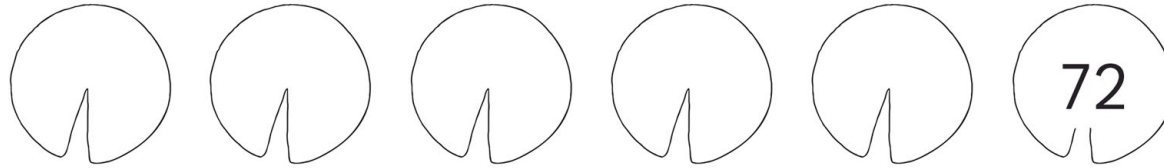
35. Add 10 each time.



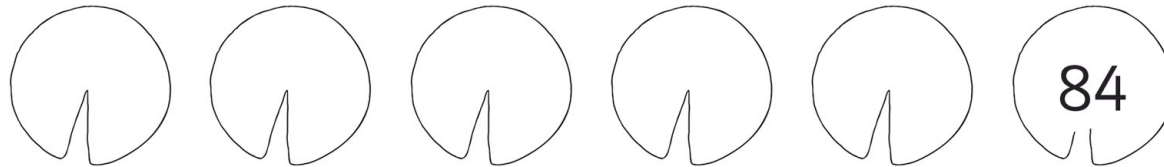
Lily Pad Numbers – Counting in 2s, 5s and 10s

Complete the sequence on the lily pads. Make sure you follow the rule!

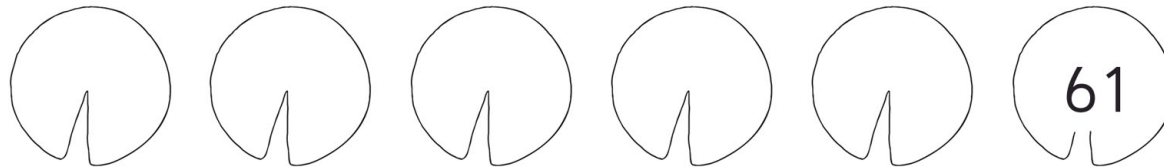
36. Take away 10 each time.



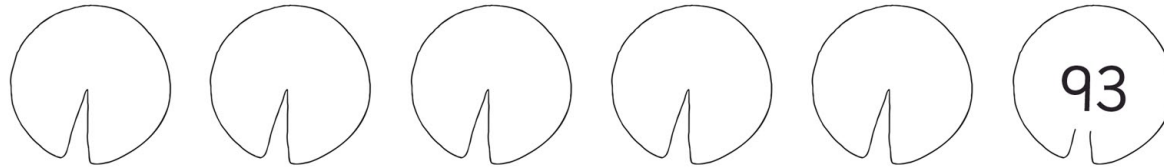
37. Take away 10 each time.



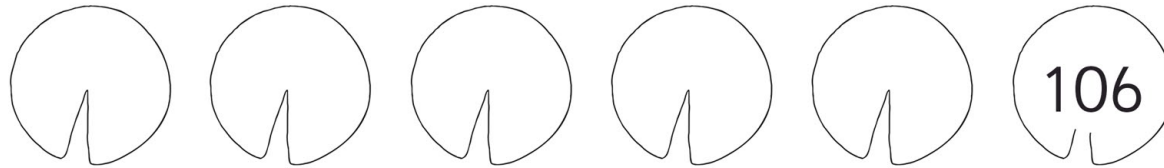
38. Take away 10 each time.



39. Take away 10 each time.



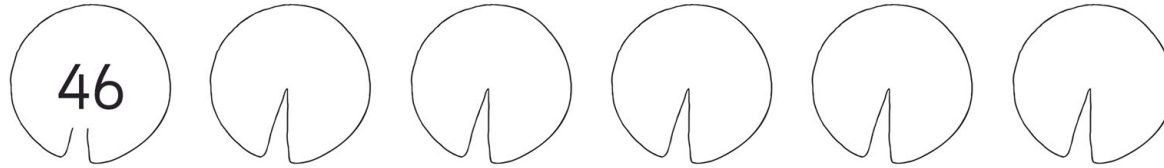
40. Take away 10 each time.



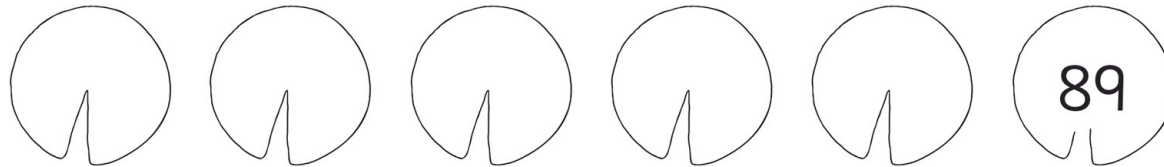
Lily Pad Numbers – Counting in 2s, 5s and 10s

Complete the sequence on the lily pads. Make sure you follow the rule!

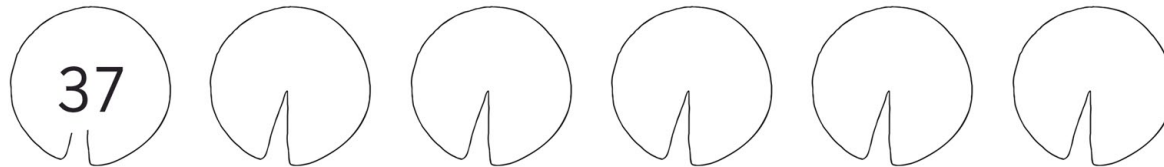
41. Add 10 each time.



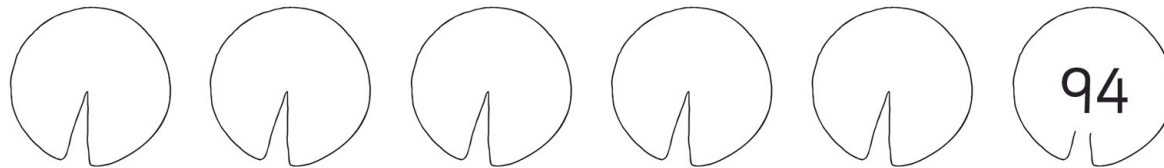
42. Take away 10 each time.



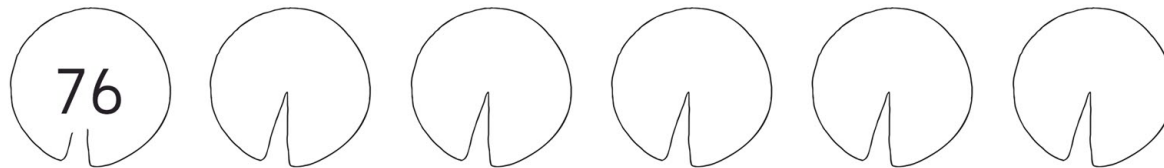
43. Add 10 each time.



44. Take away 10 each time.



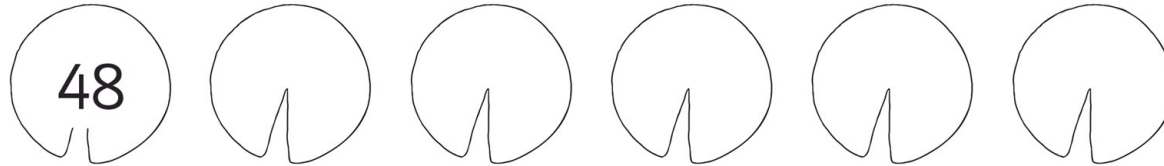
45. Add 10 each time.



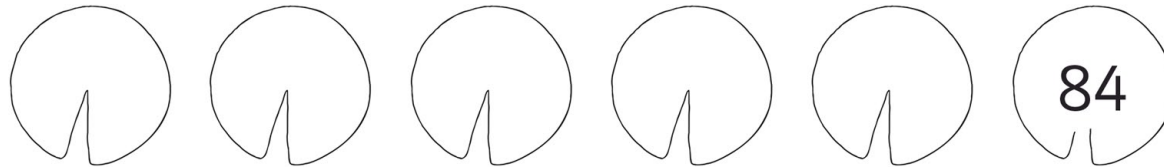
Lily Pad Numbers – Counting in 2s, 5s and 10s

Complete the sequence on the lily pads. Make sure you follow the rule!

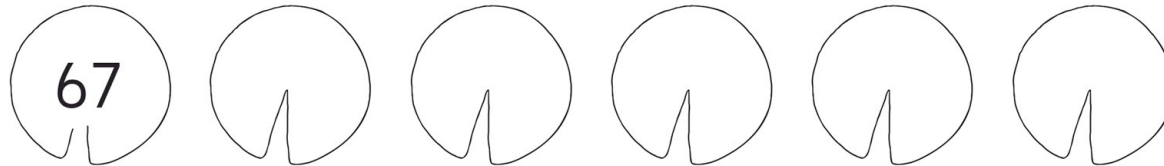
46. Add 10 each time.



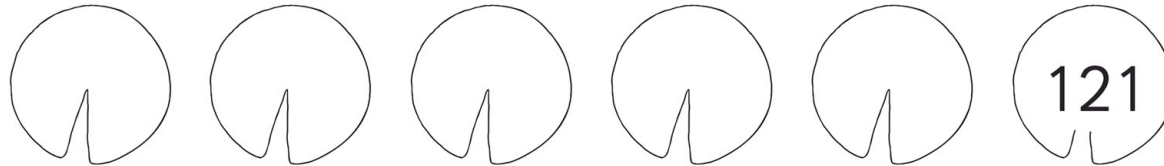
47. Take away 5 each time.



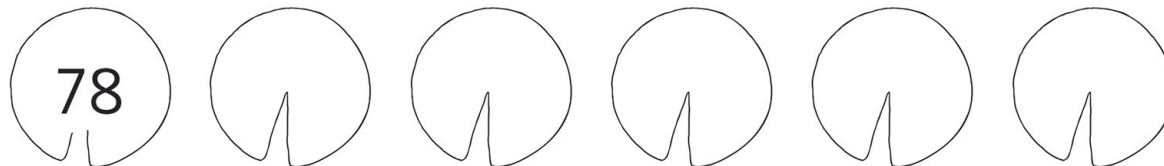
48. Add 10 each time.



49. Take away 10 each time.



50. Add 10 each time.



Lily Pad Numbers - Counting in 2s, 5s and 10s

Answers

1) 11, 13, 15, 17, 19, 21

2) 24, 26, 28, 30, 32, 34

3) 16, 18, 20, 22, 24, 26

4) 38, 40, 42, 44, 46, 48

5) 47, 49, 51, 53, 55, 57

6) 19, 17, 15, 13, 11, 9

7) 14, 12, 10, 8, 6, 4

8) 31, 29, 27, 25, 23, 21

9) 25, 23, 21, 19, 17, 15

10) 53, 51, 49, 47, 45, 43

11) 38, 36, 34, 32, 30, 28

12) 49, 51, 53, 55, 57, 59

13) 72, 70, 68, 66, 64, 62

14) 67, 65, 63, 61, 59, 57

15) 55, 57, 59, 61, 63, 65

16) 9, 14, 19, 24, 29, 34

17) 18, 23, 28, 33, 38, 43

18) 21, 26, 31, 36, 41, 46

19) 39, 44, 49, 54, 59, 64

20) 52, 57, 62, 67, 72, 77

21) 31, 26, 21, 16, 11, 6

22) 44, 39, 34, 29, 24, 19

23) 56, 51, 46, 41, 36, 31, 26

24) 28, 23, 18, 13, 8, 3

25) 81, 76, 71, 66, 61, 56

26) 41, 46, 51, 56, 61, 66

27) 57, 52, 47, 42, 37, 32

28) 73, 68, 63, 58, 53, 48

29) 68, 73, 78, 83, 88, 93

30) 87, 92, 97, 102, 107, 112

31) 4, 14, 24, 34, 44, 54

32) 12, 22, 32, 42, 52, 62

33) 36, 46, 56, 66, 76, 86

34) 49, 59, 69, 79, 89, 99

35) 62, 72, 82, 92, 102, 112

36) 72, 62, 52, 42, 32, 22

37) 84, 74, 64, 54, 44, 34

38) 61, 51, 41, 31, 21, 11

39) 93, 83, 73, 63, 53, 43

40) 106, 96, 86, 76, 66, 56

41) 46, 56, 66, 76, 86, 96

42) 89, 79, 69, 59, 49, 39

43) 37, 47, 57, 67, 77, 87

44) 94, 84, 74, 64, 54, 44

45) 76, 86, 96, 106, 116, 126

46) 48, 49, 50, 51, 52, 53

47) 84, 79, 74, 69, 64, 59

48) 67, 77, 87, 97, 107, 117

49) 121, 119, 117, 115, 113, 111

50) 78, 83, 88, 93, 98, 103