



Calculate  
 $500 \div 10$


**2** How many days are there in October?



**3** How many 10p's are there in £4.50?




**4** Today is Star Wars day. In episode V, what number does the V stand for?



**5**

$$\begin{array}{r} 83 \\ + 57 \\ \hline \end{array}$$

**6** Round 7.5 litres to the nearest litre.




**7** In the number 375 268 what does the 8 stand for?


**8** Today is No Socks day. How many socks are in 58 pairs?



**9** Write the number 909 090 in words



**10** Today is 'clean up your room' day. Cari began cleaning her room at 4:30 pm and finished 15 minutes later. What time did she finish?




**11** Today is National Windmill Day. How many lines of symmetry does this windmill have?




**12** If today is Thursday, what day was it four days ago?

**13** Calculate  $3 \times 13$

**14** Write the time shown here in words



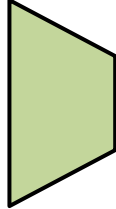
**15** Write the 15<sup>th</sup> of December 1992 as numbers only.



**16**


$$\begin{array}{r} 64 \\ - 28 \\ \hline \end{array}$$

**17** What is the name of this 2D shape?



**18** Today is Visit Your Relatives day. Granny Smith shares 36 pound coins equally between Max and her 3 other grandchildren. How much do they each receive?

**19** Write these numbers in order from the smallest to the biggest; 263, 203, 253, 223



**20**


$$\begin{array}{r} 83 \\ \times 3 \\ \hline \end{array}$$

**21** Write the following in 24 hour time...

**6:45 pm**

**22** Write the next two numbers this sequence. 4, 8, 12, 16, ...

**23** Today is Lucky Penny day. What shape is a penny?

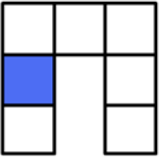


**24** What number is 300 more than 2800?


**25**

$$\begin{array}{|c|c|c|} \hline 4 & 7 & 6 \\ \hline \end{array}$$


**26** What fraction of this shape is shaded?



**27** What is the value of the missing number represented by the shape below?

 - 4 = 8


**28** Today is National Hamburger day. A Big Mac costs £3.19. How much change from £5?



**29** Is this statement true or false?

$$\frac{1}{2} < \frac{1}{4}$$

**30** Today is Water a Flower day. How many millilitres are in a litre of water?



**31** Which is bigger?  $23 + 76$  or  $12 \times 8$   
Give a reason for your answer!