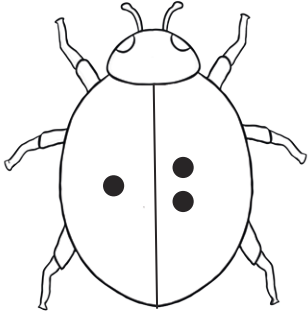
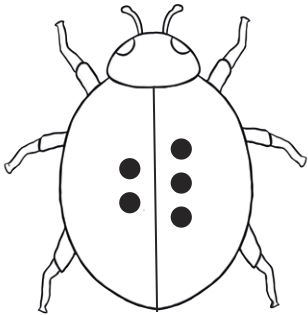


Ladybug Doubles Plus 1


Complete the number sentence for each ladybug double plus 1.



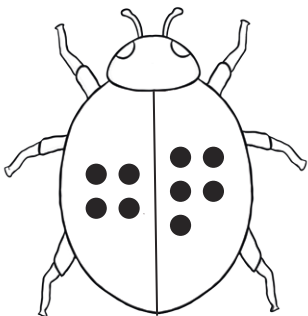
$1 + 2 = \underline{\hspace{2cm}}$




$2 + 3 = \underline{\hspace{2cm}}$



$3 + 4 = \underline{\hspace{2cm}}$




$4 + 5 = \underline{\hspace{2cm}}$




$5 + 6 = \underline{\hspace{2cm}}$

Ladybug Doubles Plus 1


Complete the number sentence for each ladybug double plus 1.




$6 + 7 = \underline{\hspace{2cm}}$




$7 + 8 = \underline{\hspace{2cm}}$



$8 + 9 = \underline{\hspace{2cm}}$




$9 + 10 = \underline{\hspace{2cm}}$




$10 + 11 = \underline{\hspace{2cm}}$

Dice Doubles Plus 1


Complete the number sentence for each dice double plus 1.




+




$1 + 2 = \underline{\hspace{2cm}}$




+




$2 + 3 = \underline{\hspace{2cm}}$




+




$3 + 4 = \underline{\hspace{2cm}}$




+



$4 + 5 = \underline{\hspace{2cm}}$




+




$5 + 6 = \underline{\hspace{2cm}}$

Dice Doubles Plus 1


Complete the number sentence for each dice double plus 1.




+




$6 + 7 = \underline{\hspace{2cm}}$




+




$7 + 8 = \underline{\hspace{2cm}}$




+




$8 + 9 = \underline{\hspace{2cm}}$




+



$9 + 10 = \underline{\hspace{2cm}}$




+



$10 + 11 = \underline{\hspace{2cm}}$

Butterfly Doubles Plus 1


Complete the number sentence for each butterfly double plus 1.



$1 + 2 = \underline{\hspace{2cm}}$




$2 + 3 = \underline{\hspace{2cm}}$



$3 + 4 = \underline{\hspace{2cm}}$




$4 + 5 = \underline{\hspace{2cm}}$




$5 + 6 = \underline{\hspace{2cm}}$

Butterfly Doubles


Complete the number sentence for each butterfly double plus 1.



$6 + 7 = \underline{\hspace{2cm}}$




$7 + 8 = \underline{\hspace{2cm}}$



$8 + 9 = \underline{\hspace{2cm}}$



$9 + 10 = \underline{\hspace{2cm}}$



$10 + 11 = \underline{\hspace{2cm}}$

Number Shape Doubles Plus 1

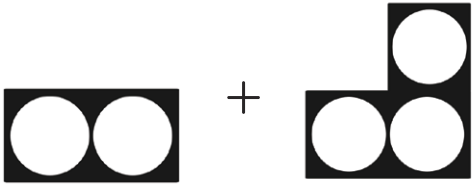
Complete the number sentence for each number shape double plus 1.



+



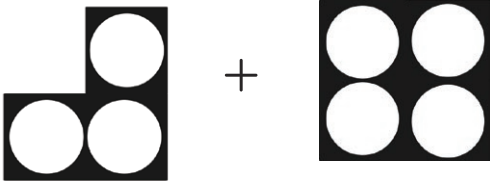
$1 + 2 = \underline{\hspace{2cm}}$




+



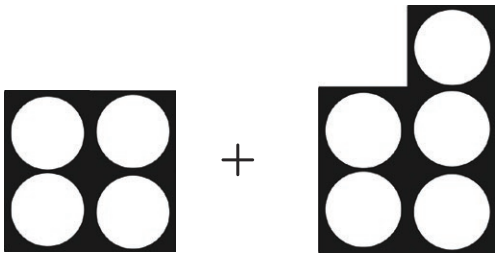
$2 + 3 = \underline{\hspace{2cm}}$



+



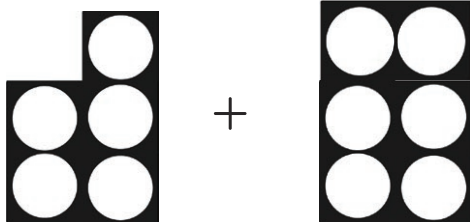
$3 + 4 = \underline{\hspace{2cm}}$




+



$4 + 5 = \underline{\hspace{2cm}}$



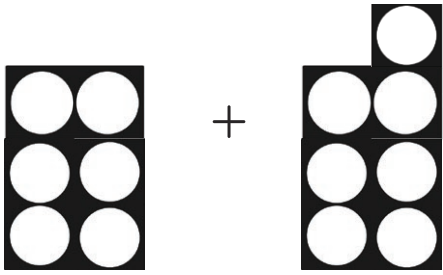
+



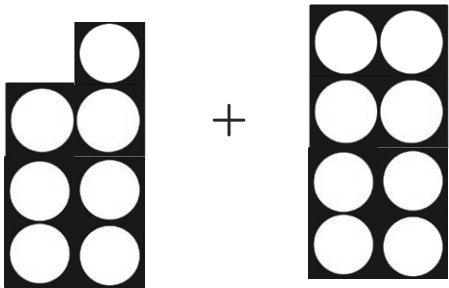
$5 + 6 = \underline{\hspace{2cm}}$

Number Shape Doubles Plus 1

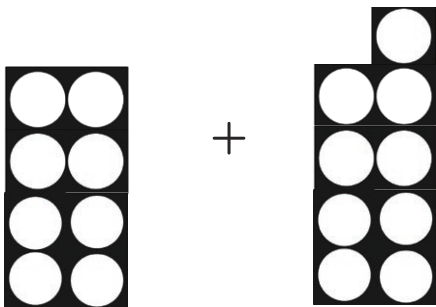
Complete the number sentence for each number shape double plus 1.




$6 + 7 = \underline{\hspace{2cm}}$



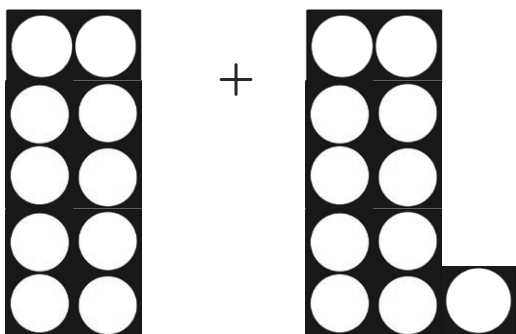
$7 + 8 = \underline{\hspace{2cm}}$



$8 + 9 = \underline{\hspace{2cm}}$



$9 + 10 = \underline{\hspace{2cm}}$



$10 + 11 = \underline{\hspace{2cm}}$