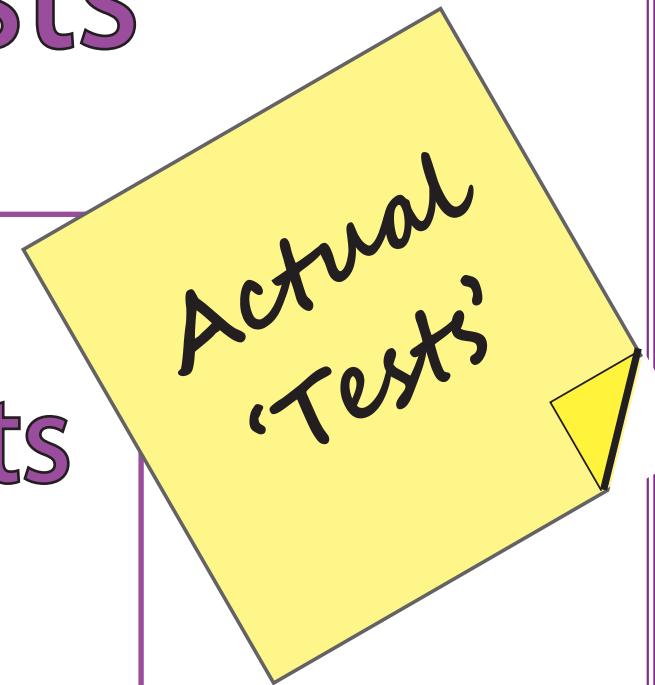




'Big Maths, Beat That'

CLIC Level Tests

Weekly
Key Assessments
For
Up-levelling



Week Four



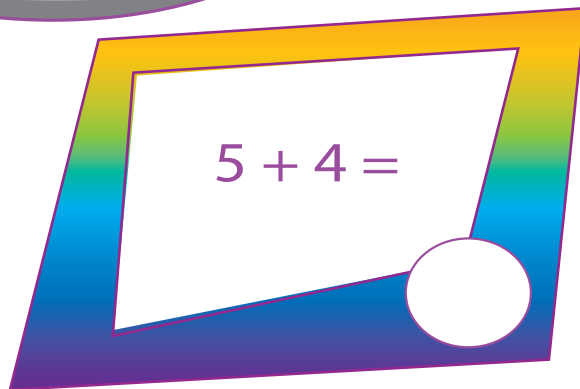
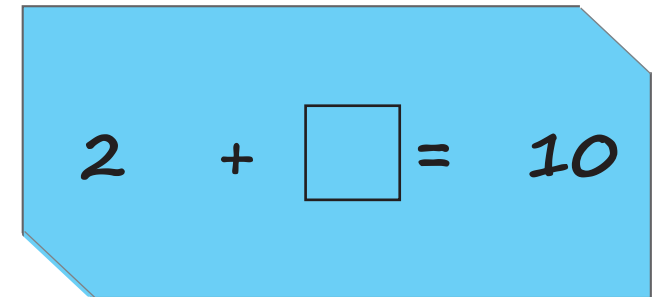
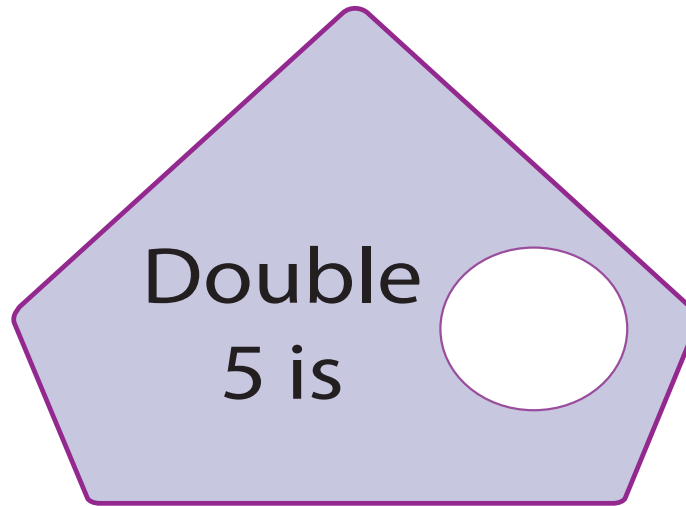
Name: _____

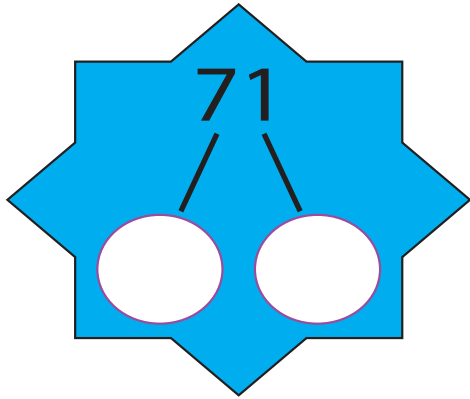


BIG MATHS BEAT THAT!

Write these numbers in order

6	4	8
<input type="text"/>	<input type="text"/>	<input type="text"/>





Write out the fact family for:

$7 + 8 = 15$

Name: _____

$70 + 40 =$

BIG MATHS BEAT THAT!

Draw a ring around the **even** numbers

43 12 66 39

$3 \times 8 =$

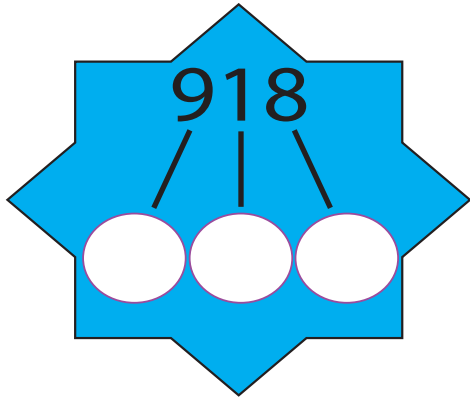
Double 9 is

$32 + \square = 40$

$63 + 8 =$

$71 - 5 =$

Half of 12 is...



Write out the fact family for:

$24 \times 17 = 408$

Name: _____

$29 \times 10 =$

$810 \div 10 =$

BIG MATHS BEAT THAT!

$81 \div 5 =$

6.5

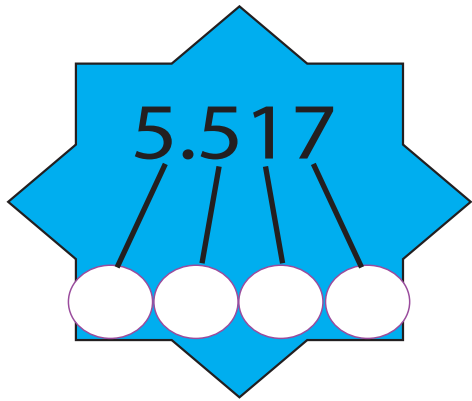
$81 + \square = 100$

$50 \times 60 =$

$218 + 354 =$

$604 - 265 =$

$93 \times 5 =$



$$\frac{3}{4} = \bigcirc = \bigcirc$$

fraction decimal percentage

Name: _____

$$77 \times 100 = \bigcirc$$

$$371 \div 10 = \bigcirc$$

BIG MATHS BEAT THAT!

Write a square number between 80 and 110

⊙

$$298 \div 9 = \bigcirc$$

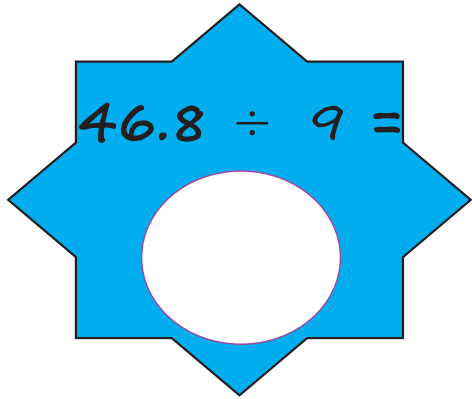
$$68 \times 84 = \bigcirc$$

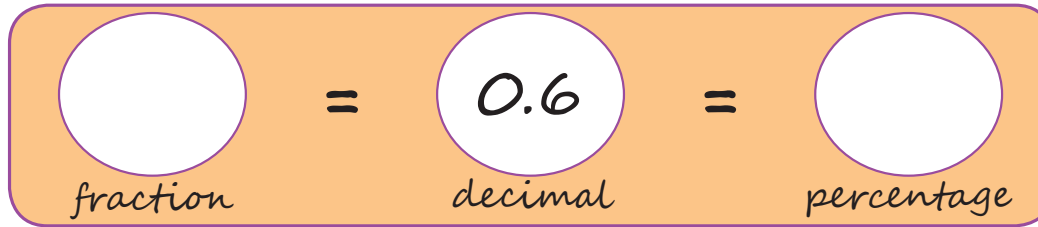
$$833 + \square = 1000$$

$$4.38 + 8.88 = \bigcirc$$

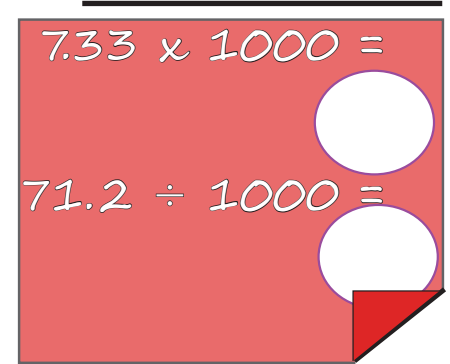
$$7.24 - 3.68 = \bigcirc$$

$$6.2 \times 8 = \bigcirc$$

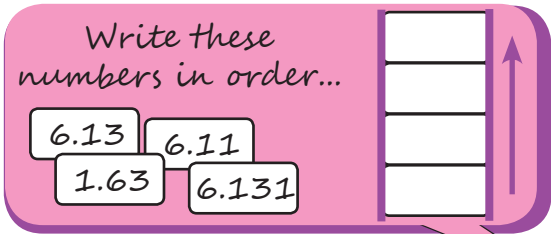

$$46.8 \div 9 =$$


$$\text{fraction} = 0.6 = \text{percentage}$$

Name: _____


$$7.33 \times 1000 =$$
$$71.2 \div 1000 =$$

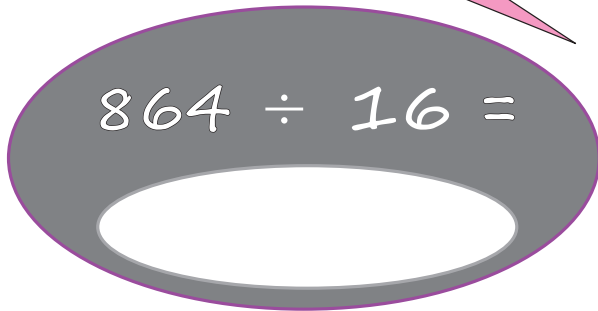
BIG MATHS BEAT THAT!

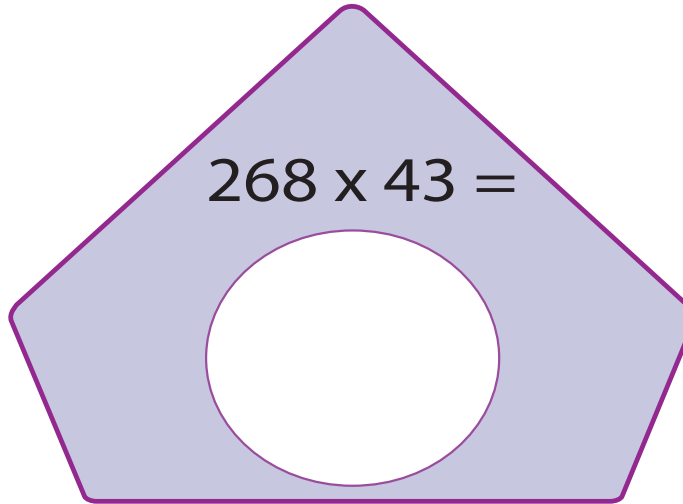


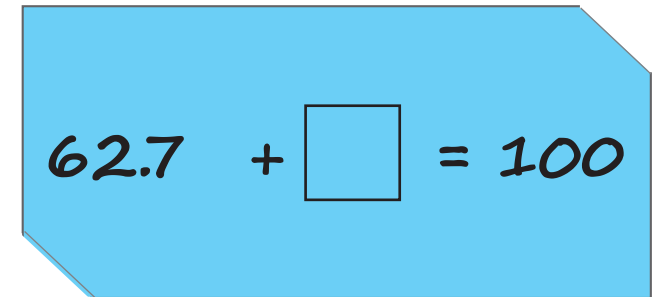
Write these numbers in order...

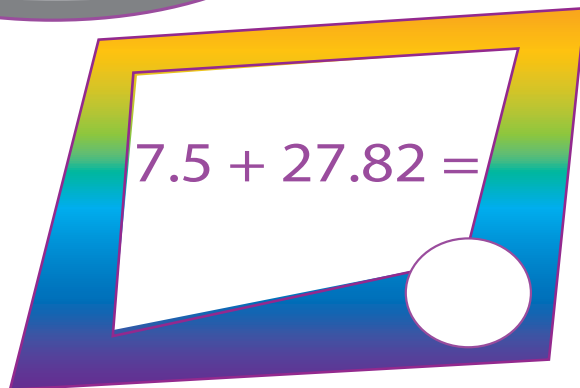
6.13	6.11
1.63	6.131

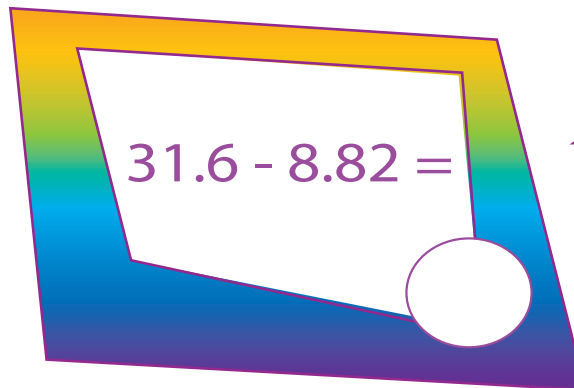
↑

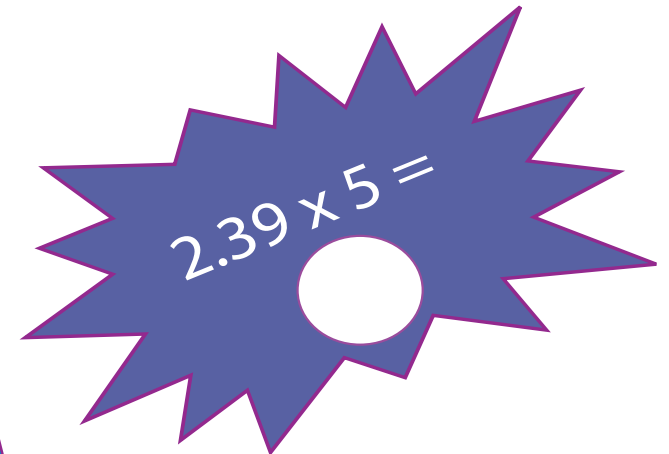

$$864 \div 16 =$$


$$268 \times 43 =$$


$$62.7 + \square = 100$$


$$7.5 + 27.82 =$$


$$31.6 - 8.82 =$$


$$2.39 \times 5 =$$

Answers

Week Four

Answers

9

$$6 + 6 = 10$$

Name: _____

How many stars?



3

BIG MATHS BEAT THAT!

Write these numbers in order

6	4	8
4	6	8

1 less than 7
is?

6

Double
5 is

10

$$2 + 8 = 10$$

$$5 + 4 =$$

9

Half of 8 is...

4

9 take away
6 is...

3

Answers

70

1

Write out the fact family for:

$7 + 8 = 15$

$15 - 7 = 8$

$8 + 7 = 15$

$15 - 8 = 7$

Name: _____

$70 + 40 =$

110

BIG MATHS BEAT THAT!

Draw a ring around the **even** numbers

43

12

66

39

$3 \times 8 =$

24

Double 9 is

18

$32 + 8 = 40$

$63 + 8 =$

71

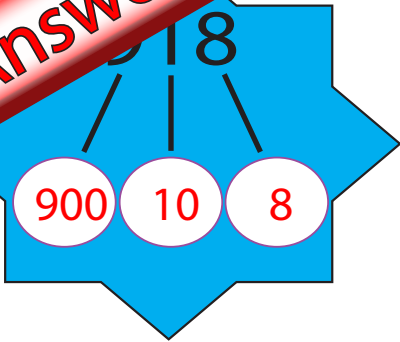
$71 - 5 =$

66

Half of 12 is...

6

Answers



Write out the fact family for:

$24 \times 17 = 408$

$408 \div 24 = 17$

$17 \times 24 = 408$

$408 \div 17 = 24$

Name: _____

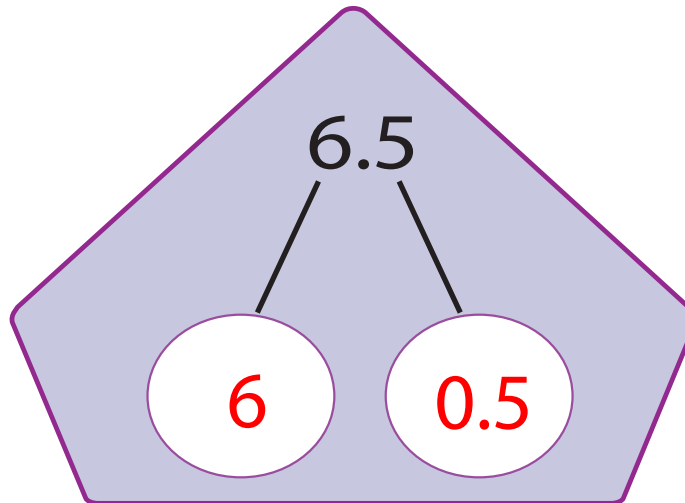
$29 \times 10 = 290$
 $810 \div 10 = 81$

BIG MATHS BEAT THAT!

$81 \div 5 = 16 \text{ r } 1$

$50 \times 60 =$

3000



$81 + 19 = 100$

$218 + 354 =$

572

$604 - 265 =$

339

$93 \times 5 = 465$

Answers

5.517

5

0.5

0.01

0.007

$\frac{3}{4}$

fraction

=

0.75

decimal

=

75%

percentage

Name: _____

$$77 \times 100 =$$

7700

$$371 \div 10 =$$

37.1

BIG MATHS BEAT THAT!

Write a square
number
between 80
and 110

81
or
100

$$68 \times 84 =$$

5712

$$833 + 167 = 1000$$

$$298 \div 9 =$$

33 r 1

$$6.2 \times 8 =$$

49.6

$$4.38 + 8.88 =$$

13.26

$$7.24 - 3.68 =$$

3.56

L4
4

Answers

$5 \div 9 =$

5.2

$\frac{6}{10}$

fraction

=

0.6

decimal

=

60%

percentage

BIG MATHS BEAT THAT!

Name: _____

$7.33 \times 1000 =$

7330

$71.2 \div 1000 =$

0.0712

Write these numbers in order...

6.131

6.13

6.11

1.63

6.13

6.11

1.63

6.131



$268 \times 43 =$

11524

$62.7 + 37.3 = 100$

$864 \div 16 =$

54

$2.39 \times 5 =$

11.95

$7.5 + 27.82 =$

35.32

$31.6 - 8.82 =$

22.78