


# Digital Time – O’Clock

What is the time?

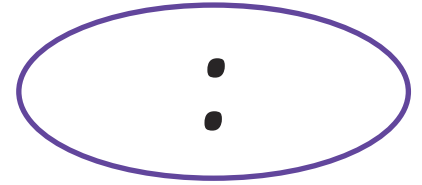
Write digits in the clocks to show the time. The first one has been done for you.




2 o'clock




5 o'clock




10 o'clock




8 o'clock




12 o'clock




3 o'clock



9 o'clock




7 o'clock




1 o'clock



4 o'clock



11 o'clock



6 o'clock

# Digital Time – O’Clock Answers

What is the time?

Write digits in the clocks to show the time. The first one has been done for you.

**02:00**

2 o'clock

**05:00**

5 o'clock

**10:00**

10 o'clock

**08:00**

8 o'clock

**12:00**

12 o'clock

**03:00**

3 o'clock

**09:00**

9 o'clock

**07:00**

7 o'clock

**01:00**

1 o'clock

**04:00**

4 o'clock

**11:00**

11 o'clock

**06:00**

6 o'clock