

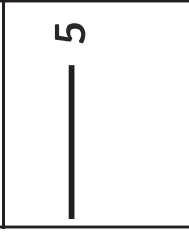
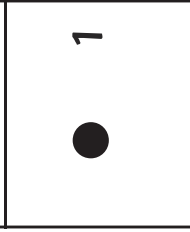
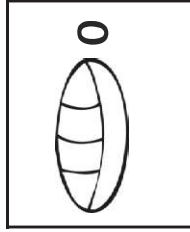
Maya Number System Numbers 0-399

Name: _____

Can you identify these numbers?

Date: _____

Key:



Number of
20s

Number of
1s and 5s
