

# Ancient Egyptian Number System

Match the numbers to the correct ancient Egyptian symbol.

1

5

10

100

1000



Write the numbers using ancient Egyptian symbols.

6

12


20

210

600

\_\_\_\_\_

Translate the ancient Egyptian numbers.



\_\_\_\_\_  
\_\_\_\_\_  
\_\_\_\_\_  
\_\_\_\_\_


Translate and solve the ancient Egyptian calculations.

$$\begin{aligned} \text{II} + \text{n} &= \\ \text{nnI} + \text{n} &= \\ \text{nnnn} + \text{n} &= \end{aligned}$$

Arrange the ancient Egyptian numbers in size order, from smallest to largest.

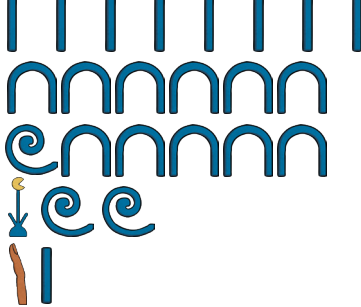


Complete the ancient Egyptian number sequences.



# Ancient Egyptian Number System






Match the numbers to the correct ancient Egyptian symbols.

60	
150	
8	
10 001	
1200	






Write the numbers using ancient Egyptian symbols.

50	_____	1521	_____
260	_____	10 100	_____
444	_____		



Translate the ancient Egyptian numbers.

	_____
	_____
	_____
	_____
	_____

Translate and solve the ancient Egyptian calculations.

 +  =  
 +  =  
 +  =

Arrange the ancient Egyptian numbers in size order, from smallest to largest.

 , 
  , 
  , 
 

Complete the ancient Egyptian number sequences.

 , 
  , 
 \_\_\_\_\_ ,  
 , 
  , 
 \_\_\_\_\_ , 
 \_\_\_\_\_

# Ancient Egyptian Number System

Match the numbers to the correct ancient Egyptian symbols.

1 111 111



10 001



50



100 005



95



1489



132



Write the numbers using ancient Egyptian symbols.

20

\_\_\_\_\_

1562

\_\_\_\_\_

230

\_\_\_\_\_

10 400

\_\_\_\_\_

439

\_\_\_\_\_

Translate the ancient Egyptian numbers.



\_\_\_\_\_



\_\_\_\_\_



\_\_\_\_\_



\_\_\_\_\_



\_\_\_\_\_

Translate and solve the ancient Egyptian calculations.

 +  =

 +  =

 +  =

Arrange the ancient Egyptian numbers in size order, from smallest to largest.



Complete the ancient Egyptian number sequences.

