
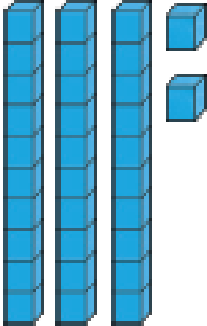

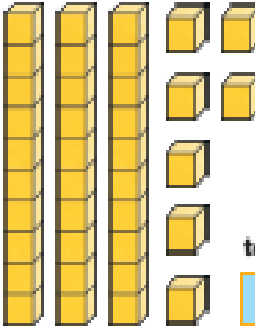
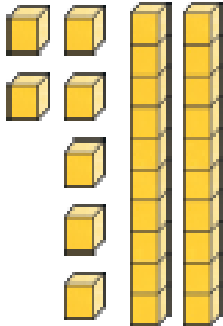

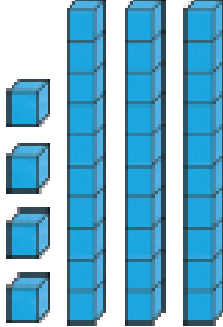
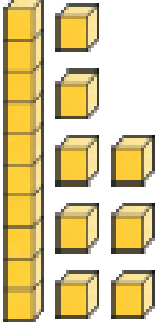
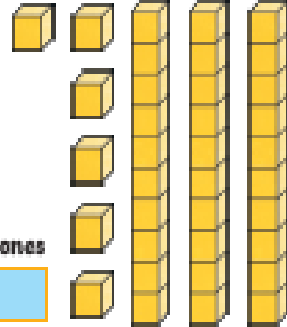



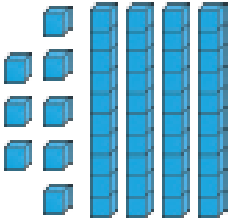
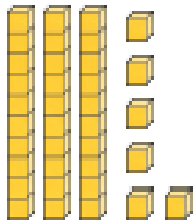
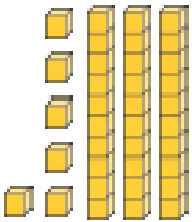


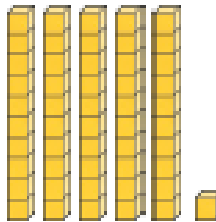
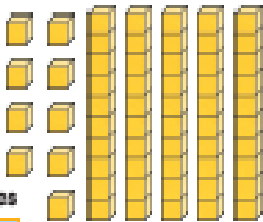
Greater Than or Less Than

Compare these numbers. Write the number shown by the pictures then circle the correct sign. The first one is an example.



 <p>tens ones 3 2</p>	<p>> < =</p>	 <p>tens ones 2 4</p>
 <p>tens ones □ □</p>	<p>> < =</p>	 <p>tens ones □ □</p>
 <p>tens ones □ □</p>	<p>> < =</p>	 <p>tens ones □ □</p>
 <p>tens ones □ □</p>	<p>> < =</p>	 <p>tens ones □ □</p>

Greater Than or Less Than

 <p>tens ones</p> <input type="text"/> <input type="text"/>	<p>> < =</p>	 <p>tens ones</p> <input type="text"/> <input type="text"/>
 <p>tens ones</p> <input type="text"/> <input type="text"/>	<p>> < =</p>	 <p>tens ones</p> <input type="text"/> <input type="text"/>
 <p>tens ones</p> <input type="text"/> <input type="text"/>	<p>> < =</p>	 <p>tens ones</p> <input type="text"/> <input type="text"/>
 <p>tens ones</p> <input type="text"/> <input type="text"/>	<p>> < =</p>	 <p>tens ones</p> <input type="text"/> <input type="text"/>

