

Number Shape Addition to 20

Use the number shapes to work out the answers to each addition question.

$$\begin{array}{|c|} \hline \text{10 dots} \\ \hline \end{array} + \begin{array}{|c|} \hline \text{2 dots} \\ \hline \end{array} = \square$$




$$\begin{array}{|c|} \hline \text{10 dots} \\ \hline \end{array} + \begin{array}{|c|} \hline \text{3 dots} \\ \hline \end{array} = \square$$




$$\begin{array}{|c|} \hline \text{7 dots} \\ \hline \end{array} + \begin{array}{|c|} \hline \text{4 dots} \\ \hline \end{array} = \square$$


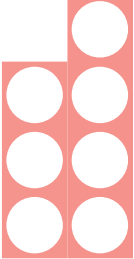

$$\begin{array}{|c|} \hline \text{9 dots} \\ \hline \end{array} + \begin{array}{|c|} \hline \text{5 dots} \\ \hline \end{array} = \square$$




$$\begin{array}{|c|} \hline \text{11 dots} \\ \hline \end{array} + \begin{array}{|c|} \hline \text{1 dot} \\ \hline \end{array} = \square$$




$$\begin{array}{|c|} \hline \text{12 dots} \\ \hline \end{array} + \begin{array}{|c|} \hline \text{2 dots} \\ \hline \end{array} = \square$$




 $+$  $=$ 




 $+$  $=$ 

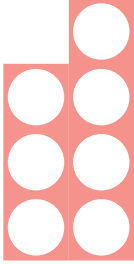


 $+$  $=$ 




 $+$  $=$ 




 $+$  $=$ 




 $+$  $=$ 



 +  = 

 +  = 

 +  = 

 +  = 

 +  = 

 +  = 