



Respectful Inclusive Safe Kind









P5M Home Learning Grid

4th May – 17th May 2020

Here are some suggested activities for you to try at home. These will be updated on the website every fortnight.

<https://blogs.glowscotland.org.uk/st/braeheadprimaryschool/>

<p><u>Literacy – Spelling</u> </p> <p>How many different words can you make from the letters in the sentence below? Only use the letters that are there.</p> <p>Grab a pencil and some paper and make a list.</p> <p>‘Learning from home is fun’</p>	<p><u>Literacy – Writing</u> </p> <p>This is a strange and difficult time for us all. Covid-19 has changed all our ways of living. We are living through History right now. Why not begin to make a Time Capsule to record how you and your family are feeling. There are 4 tasks to get you started.</p> <ol style="list-style-type: none"> 1) COVID-19 Time Capsule title page 2) All about me page 3) How am I feeling? Page 4) Things I am doing to keep busy page <p>You can use the sheets attached to help you. In our next grid we will add different tasks to add to your time capsule.</p>	<p><u>Literacy – Reading</u> </p> <p>Read the passage about Louisa Jordan. Find out who she was and why she is important today. Choose the level of Comprehension questions to answer. Remember to answer in full sentences with correct punctuation and careful copying of words from the text or you may wish to answer these orally.</p> <p>There is also a Fact file for Louisa Jordan you can copy and complete using the facts you have learned from reading the passage.</p> <p>Continue to read as much as you can and record in your First Minister’s Reading Challenge passport.</p>
<p><u>Numeracy and Maths</u> </p> <p>Addition sums task. You could copy these sums onto paper and complete. If you want to Challenge yourself more make up your own 4, 5 or 6 digit numbers to add together.</p> <p>Remember to make sure that your digits are lined up in the correct columns.</p> <p>Continue to practise your times tables – you can use the Multiplication Wheels sheet as an idea or games on www.topmarks.com (Hit the button) and www.multiplication.com and TTRS</p>	<p><u>Numeracy and Maths</u> </p> <p>In class in Term 1 we worked on Sudoku. It is a game of logic and reasoning. You will use processes of elimination too.</p> <p>Remember not to repeat any numbers in each row and column.</p> <p>Try some of the Sudoku tasks – choose the level that suits you best.</p>	<p><u>Numeracy and Maths</u> </p> <p>Choose which level of compass and Pirate Map co-ordinates tasks you would like to completeor you could have a go at them all!</p>

HWB

Louisa Jordan was a kind and caring person. These are wonderful qualities to have – it is a great feeling to know that you have done something to help someone. Our kindness grid is the same idea as our 'Jar of Kindness' in class. See how many activities you can do from our Kindness Grid.



Creativity

Draw your own picture that shows kindness and love. Perhaps there is someone in your family that you would like to give it to? Or maybe you could post it to someone that you are missing?



Outdoor / Active

Make up your own 10 minute fitness routine. Try to follow it daily.

If you wish, write it down and maybe we could even have a try at following your instructions. 😊



BBC Scotland Bitesize are showing some fabulous lessons daily from 10am -11am. If you can please watch some of these - we certainly will be 😊

You can upload any of these tasks to Seesaw (if you would like) and we will be able to give you some feedback. We would also love to see what else you have been doing at home.

We miss you all, stay safe and we hope to see you all soon.



Mrs MacAlpine and Mrs McNab

Remember that you can use Sumdog



and TTRS



at anytime too.

Louisa Jordan



Louisa Jordan was a Scottish nurse from Glasgow, who served during the First World War (WW1) .

There is a temporary hospital being set up at the SEC Centre to treat people with Coronavirus. The Scottish Government have named it after her. Louisa was born in Maryhill, Glasgow, on the 24th of July 1878. Her parents were Henry and Helen Jordan. While she was growing up, she lived with them and her two brothers.

Having trained as a nurse, Louisa worked in Manchester's Crumpsall Infirmary. She later returned to Scotland and worked at Shotts Fever Hospital before spending time as a district nurse based in Buckhaven, Fife.

The First World War broke out in 1914. Louisa signed up at the beginning of December with the Scottish Women's Hospital for Foreign Service. By the middle of December, Louisa was on a ship bound for the front line. Louisa served in Serbia. Here, she tended to wounded men from the front line. Conditions were harsh and nothing like the conditions in modern day hospitals. In February 1915, an outbreak of typhus hit the region. Louisa was put in charge of a fever ward in the city of Kragujevac.

Typhus is an infectious disease spread by lice, fleas or mites. As the conditions in Serbia were so bad, the disease spread quickly and claimed many thousands of lives. Along with many other nurses and doctors, Louisa contracted typhus herself. Tragically, she passed away on the 6th of March 1915. Louisa was only 36 when she died.

Louisa's name appears on the Buckhaven War Memorial and on a memorial in Wilton Church in Glasgow, which names those who gave their lives during the First World War. Each year in Serbia, people gather to remember the incredible sacrifice Louisa and other nurses made during the First World War.

On the 1st of April 2020, the Scottish Government announced that they would be naming the temporary hospital being set up at the SEC in Glasgow after Louisa. This hospital is needed to treat patients suffering from the effects of the Coronavirus. The hospital will serve as a tribute to Louisa's courageous service.

Tricky Comprehension Questions

- (1) When was Louisa Jordan born?
- (2) Where was she from?
- (3) What did Louisa train to be?
- (4) What did Louisa do in Serbia?
- (5) What were the conditions like in the hospitals in 1914?
- (6) What disease broke out in 1915 in the area Louisa was working in?
- (7) Explain what Typhus is.
- (8) How did Louisa die?
- (9) In Serbia how do people remember Louisa and other nurses from WW1?
- (10) Find the word in the final paragraph which tells us that the Louisa Jordan hospital is not to stay set up forever.
- (11) Where is the Louisa Joran hospital set up?
- (12) If there was to be a temporary hospital set up in Stirling, what would be a good name for it and why?

Trickier Comprehension Questions

- (1) When and where was Louisa Jordan born?
- (2) What members of her family did she grow up with?
- (3) What does it mean 'Louisa signed up at the beginning of December'?
- (4) What words tell us that the conditions of the hospitals in Serbia during WW1 were poor?
- (5) Explain what typhus is.
- (6) Write the phrase that tells us that typhus killed many people in Serbia.
- (7) In Serbia how do people remember Louisa and other nurses from WW1?
- (8) Which continent is Serbia in?
- (9) Serbia is 'landlocked' which means it has countries bordering all around it. Can you find out the names of two countries that border Serbia?
- (10) What does the word 'temporary' mean in the final paragraph?
- (11) Where is the 'Louisa Joran' hospital set up? Why might they have chosen this location to set it up?
- (12) If there was to be a temporary hospital set up in Stirling, what would be a good name for it and why?

Kindness Grid

<p>Smiles are contagious. If someone smiles at you it is hard not to smile back.</p> <p>Smile at someone to cheer them up.</p>	<p>Tell someone a reason why you are so proud of them.</p>	<p>Ask someone in your family how their day is going.</p>
<p>Volunteer to do a chore that isn't normally yours.</p>	<p>It's good to laugh. Tell someone in your family some jokes or even have a go at making up your own.</p>	<p>Give someone in your home a high five or a hug.</p>
<p>Write a note or draw a picture to thank your postie or bin collectors. Put in your window so they can see it.</p>	<p>Create your own kindness act.</p>	<p>Write a nice note to someone you live with and leave it on their pillow so they get a nice surprise when they go to bed.</p>

Sudoku

Fill in the missing numbers!

2			
		2	
4			
			3

1			
		1	
3			
			4

3			
			3
	1		
			2

			3
	3		
			4
	4		

Every mini-grid, column and row must contain the numbers 1 to 4.

Sudoku 6 x 6 Puzzles

Each row and column contains all the digits 1 to 6.

	2		3	6	
			5		2
1	5				4
2		3	1	5	6
4	3		6	1	
6	1		4	2	

	5			4	3
6				1	5
		6		3	
		3		6	
4	6	5	3		1
3			4	5	

6	3	2	4		
4		1	6	3	
	6	3	1		
1		5		6	
5			3		4
					6

5	2	4		3	
			5		2
	4		6	1	5
6	5	1		2	
			2	5	3
2			4	6	1

1	3	2			4
4	5	6		3	2
				1	
5	4	1	6		
2		5	3		1
3	1	4	2		







	6		5		
	4	3		2	
				5	
6					4
					1
	3		4		5

Pirate Map Coordinates

I can read, write and plot coordinates in the first quadrant.



What is at these coordinates on the pirate map?
(I,4) = _____
(A,1) = _____
(E,3) = _____
(F,2) = _____
(G,4) = _____

Write the coordinate of these places on the pirate map:
 = (,)
 = (,)
 = (,)
 = (,)
 = (,)
 = (,)







Plot these coordinates on the grid using my finger.
(B,1)
(C,4)
(E,2)
(I,1)
(G,3)

Pirate Map Coordinates

I can read, write and plot coordinates in the first quadrant.



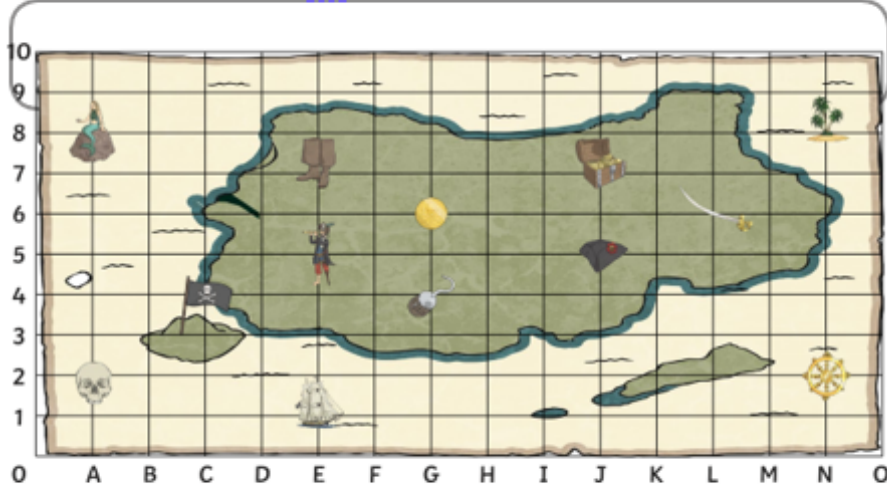
What is at these coordinates on the pirate map?
(A,7) = _____
(A,1) = _____
(E,0) = _____
(I,4) = _____
(H,6) = _____

Write the coordinate of these places on the pirate map:
 = (,)
 = (,)
 = (,)
 = (,)
 = (,)
 = (,)






Plot these coordinates on the grid using my finger.
(B,1)
(C,7)
(D,4)
(I,1)
(K,4)

Pirate Map Coordinates

I can read, write and plot coordinates in the first quadrant.



















What is at these coordinates on the pirate map?
(E,5) = _____
(G,6) = _____
(L,6) = _____
(J,7) = _____
(A,8) = _____

Write the coordinate of these places on the pirate map:
 = (,)
 = (,)
 = (,)
 = (,)
 = (,)

Plot these coordinates on the grid using my finger.
(B,1)
(N,5)
(I,5)
(D,9)
(H,10)

Compass Directions




















		bakery 		mosque 	
church 		park 	hospital 		
	taxi rank 		postbox 		cafe 
fire station 		toy shop 	airport 		
	school 	vet 		pool 	
theme park 		police station 			beach 
bus stop 		dentist 	Start 	supermarket 	

Compass directions: the town

- From the start, go north 4 squares. Where are you now?
- Go east 3 squares. Where are you now?
- Go south 3 squares. Where are you now?
- Go west 6 squares. Where are you now?
- Go east 2 squares. Where are you now?
- Start at the school. How do you get to the taxi rank?
- Give directions from the dentist to the toy shop.



Compass Directions






















		bakery 			mosque 	
church 		park 		hospital 		
	taxi rank 		postbox 			cafe 
fire station 		toy shop 		airport 		
	school 		vet 		pool 	
theme park 		police station 				beach 
bus stop 		dentist 	Start 		supermarket 	

Compass directions: the town

- From the start, go north 4 squares. Where are you now?
- Go north-east 1 square. Where are you now?
- Go south 2 squares. Where are you now?
- Go west 4 squares. Where are you now?
- Go south-east 2 squares. Where are you now?
- Start at the school. How do you get to the theme park?
- Direct someone from the theme park to the hospital.
- Write directions from somewhere on the map to another place.



Compass Directions

		bakery 			mosque 	
church 		park 		hospital 		
	taxi rank 		postbox 			cafe 
fire station 		toy shop 		airport 		
	school 		vet 		pool 	
theme park 		police station 				beach 
bus stop 		dentist 	Start 		supermarket 	

Compass directions: the town

- From the start, go north 4 squares and 3 squares east. Where are you now?
- Go south-west 4 squares and west 2 squares. Where are you now?
- Go north-east 1 square and east 1 square. Where are you now?
- Go east 4 squares and north-west 1 square. Where are you now?
- Go north-west 2 squares and north-east 2 squares. Where are you now?
- Start at the vet. How do you get to the church?
- Give directions from the park to the pool.
- Write directions from somewhere on the map to another place.



MY 2020 COVID-19 TIME CAPSULE



BY: _____

♡♡ ALL ABOUT ME ♡♡

I AM

YEARS
OLD

I STAND

INCHES
TALL

I WEIGH

POUNDS

SHOE SIZE

MY FAVOURITES

TOY: _____

COLOUR: _____

ANIMAL: _____

FOOD: _____

SHOW: _____

MOVIE: _____

BOOK: _____

ACTIVITY: _____

PLACE: _____


SONG: _____

MY BEST FRIEND/S:

WHEN I GROW UP I WANT TO BE:

DATE: _____

HOW I'M FEELING



HOW MY FACE LOOKS



I AM MOST THANKFUL FOR

WORDS TO DESCRIBE HOW I FEEL:

WHAT I HAVE LEARNT MOST FROM THIS EXPERIENCE:

THE 3 THINGS I AM MOST EXCITED TO DO WHEN THIS IS OVER:

1

2

3

YOU ARE NOT STUCK AT HOME, YOU ARE SAFE AT HOME!

WHAT I AM DOING TO
KEEP BUSY AT HOME:

