


Use this sheet to complete your maths challenges!


Bananas



Pears



Pineapples



Apples




Peaches



Grapes



Oranges



Money Challenge 1

How much would it cost to buy **2 bunches of bananas, 5 apples and 6 peaches?**

Money Challenge 2

How much would it cost to buy **1 pineapple, 12 oranges and 3 bunches of grapes?**

Money Challenge 3

You have £5.00. Can you afford to buy **12 peaches?** Work out how much change you will get or how much more money you need, if not.

Money Challenge 4

You have £12.00. Can you afford to buy **2 pineapples, 6 peaches, 8 apples, 24 oranges?** Work out how much it will be and how much change or more money you will need.

Money Challenge 5

How much would it cost to buy **5 bunches of bananas, 8 pears and 12 peaches?**

Money Challenge 6

How much would it cost to buy **4 bunches of grapes, 12 oranges and 10 apples?**

Money Challenge 7

You have £8.00. Can you afford to buy **2 bunches of bananas and 3 pineapples?** Work out how much change you will get or how much more money you may need.

Money Challenge 8

You have £15.00. Can you afford to buy **4 pineapples, 12 peaches, 8 apples and 24 oranges?** Work out how much it will be and how much change or more money you will need.

Money Challenge 1

How much would it cost to buy **2 bunches of bananas, 5 apples and 6 peaches?**

$$£2.10 + £2.45 + £2.30 = £6.85$$

Money Challenge 2

How much would it cost to buy **1 pineapple, 12 oranges and 3 bunches of grapes?**

$$£1.99 + £4.00 + 2.99 + 2.99 + 2.99 = £14.96$$

Money Challenge 3

You have £5.00. Can you afford to buy **12 peaches?** Work out how much change you will get or how much more money you need, if not.

Yes. £4.60. 40p

Money Challenge 4

You have £12.00. Can you afford to buy **2 pineapples, 6 peaches, 8 apples, 24 oranges?** Work out how much it will be and how much change or more money you will need.

No. $£3.98 + £2.30 + £3.92 + £8.00 = £18.20$.
£6.20 is needed.

Money Challenge 5

How much would it cost to buy **5 bunches of bananas, 8 pears and 12 peaches?**

$$£5.25 + £6.32 + £4.60 = £16.17$$

Money Challenge 6

How much would it cost to buy **4 bunches of grapes, 12 oranges and 10 apples?**

$$£11.96 + £4.00 + 4.90 = 20.86$$

Money Challenge 7

You have £8.00. Can you afford to buy **2 bunches of bananas and 3 pineapples?** Work out how much change you will get or how much more money you may need.

$$\text{No. } £2.10 + £5.97 = £8.07. \text{ 7p is needed.}$$

Money Challenge 8

You have £15.00. Can you afford to buy **4 pineapples, 12 peaches, 8 apples and 24 oranges?** Work out how much it will be and how much change or more money you will need.

$$\text{No. } £7.96 + £4.60 + £3.92 + £8.00 = £24.48. \\ £9.48 \text{ is needed.}$$