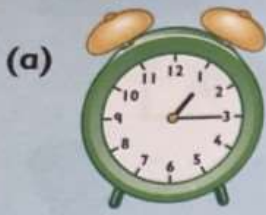


1 Copy and complete each time.



(a) quarter past —




(b) quarter to —



(c) half past —



(d) — o'clock



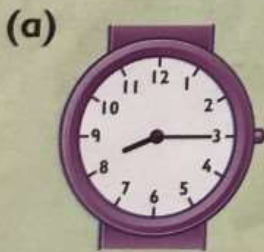
(e) quarter to —



(f) quarter past —

2 Write these times using

o'clock or half past or quarter past or quarter to



(a)




(b)



(c)



(d)



(e)



(f)



(g)



(h)

Time: o'clock, half past, quarter to/past