

Match.

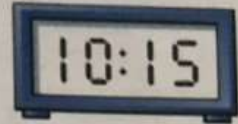


quarter past 2


quarter past 8

quarter past 12

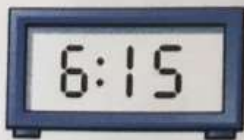
quarter past 10



Write each time.



Colour to match.



quarter past 11

quarter past 6



quarter past 3



Time: quarter past