




1 Copy and complete each time.

(a) 
quarter past 1

(b) 
quarter to 11

(c) 
half past 1


(d) 
11 o'clock


(e) 
quarter to 6


(f) 
quarter past 12


2 Write these times using


o'clock or half past or quarter past or quarter to


(a) 
quarter past 8

(b) 
half past 6


(c) 
3 o'clock

(d) 
quarter past 9

(e) 
quarter to 4

(f) 
quarter past 11

(g) 
10 o'clock

(h) 
quarter to 3

Time: o'clock, half past, quarter to/past