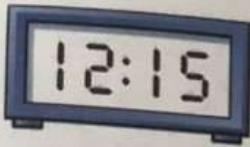



Match.



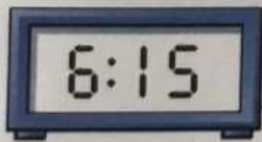
- quarter past 2
- quarter past 8
- quarter past 12
- quarter past 10



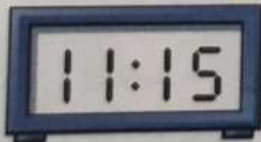
Write each time.



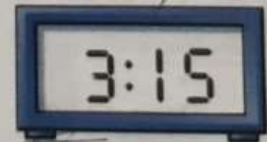
Colour to match.



- quarter past 11
- quarter past 6



- quarter past 3



Time: quarter past