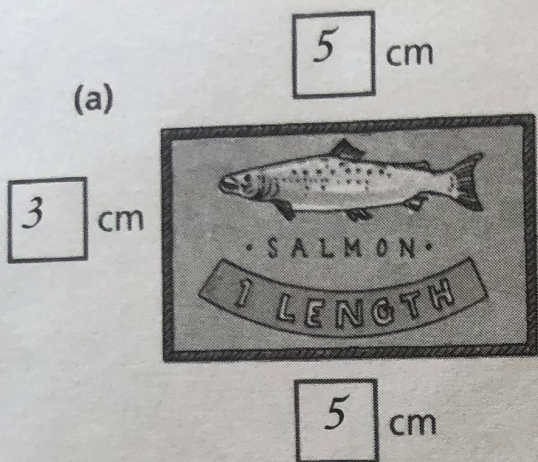
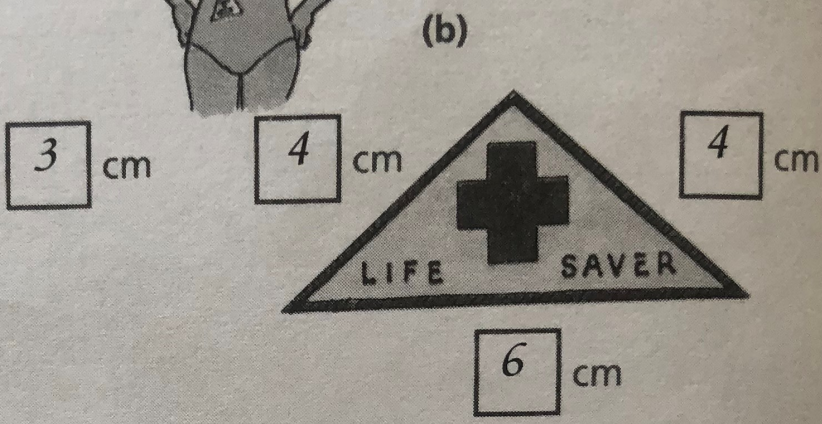


Swimming awards badges

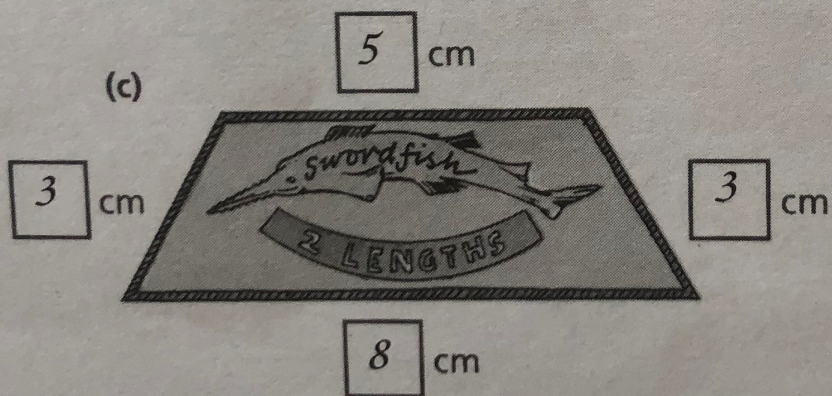
- 1 For each of these badges
- measure the lengths of the sides
 - find the perimeter.



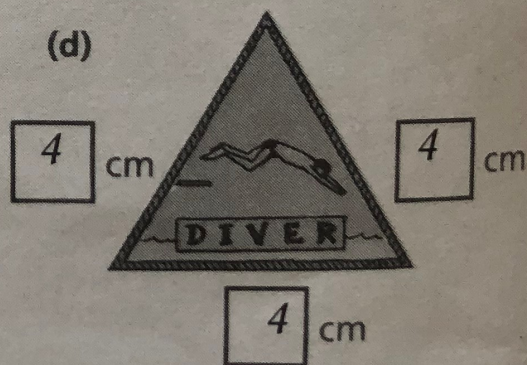
$$\begin{aligned} \text{Perimeter} &= \underline{5} + \underline{5} + \underline{3} + \underline{3} \\ &= \underline{16} \text{ cm} \end{aligned}$$




$$\begin{aligned} \text{Perimeter} &= \underline{4} + \underline{4} + \underline{6} \\ &= \underline{14} \text{ cm} \end{aligned}$$




$$\text{Perimeter} = \underline{19} \text{ cm}$$



$$\text{Perimeter} = \underline{12} \text{ cm}$$



$$\text{Perimeter} = \underline{20} \text{ cm}$$



$$\text{Perimeter} = \underline{10} \text{ cm}$$