


1 How many plants are left?

(a) Sell 21.



(b) Sell 19.



2

(a) $92 - 41$

(b) $85 - 71$


(c) $73 - 49$

(d) Subtract 69 from 97.


(e) 60 take away 29

3 How many plants are left?


(a) Sell 22.



(b) Sell 22.



(c) Sell 18.



(d) Sell 18.



4