



3 List pairs of numbers that add to make 100.




4



(a) $35 + 40$ (b) $50 + 29$ (c) $63 + 30$

(d) $70 + 18$ (e) $20 + 75$ (f) $31 + 60$

5



(a) $24 + \blacksquare = 64$

(b) $46 + \blacksquare = 76$

(c) $20 + \blacksquare = 90$

(d) $\blacksquare + 15 = 45$

(e) $\blacksquare + 70 = 91$

(f) $\blacksquare + 19 = 79$