



1 Add 10.




(a) 32	(b) 47	(c) 29	(d) 51	(e) 68	(f) 75	(g) 60	(h) 83
--------	--------	--------	--------	--------	--------	--------	--------

2




(a)  
50 add 20

(b)  
60 plus 30




3 List pairs of numbers that add to make 100.



10	80	30	20	90	40	60	50	70
----	----	----	----	----	----	----	----	----

4



(a) $35 + 40$	(b) $50 + 29$	(c) $63 + 30$
(d) $70 + 18$	(e) $20 + 75$	(f) $31 + 60$