




These cards are shared equally among three shelves.
How many cards go on each shelf and how many are left over?



These cards are shared equally among four shelves.
How many cards go on each shelf and how many are left over?

(a) 34 cards

(b) 31 cards

(c) 25 cards

How many boxes can be filled with cards?
How many cards are left over?

	(a)	(b)	(c)	(d)	(e)
Number of cards	17	38	46	77	60
Number in each box	2	6	5	8	7



How many cards can you buy?
How much money do you have left?

	(a)	(b)	(c)	(d)	(e)	(f)
You have...	47p	19p	37p	54p	75p	95p
Each card costs...	6p	2p	7p	5p	8p	9p