


Name : _____


Three-Digit Addition

Sheet 1

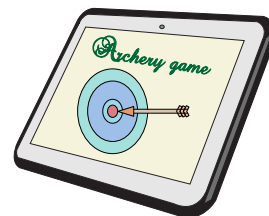
- 1) Viola, a candle maker produces 200 pillar candles and 250 rolled candles in seven days. How many candles in all does Viola make in a week?




- 2) A botanical garden houses 360 Juniper bonsais and 150 Ficus bonsais. How many bonsais in all does the botanical garden shelter?




- 3) In an online archery game, Joshua scored 800 points and his sister, Janet picked up 635 points. How many points did they accumulate altogether?



- 4) An animal farm has 451 sheep and 320 goats. How many grazing animals does the farm shelter in all?



- 5) Alice made and sold 505 crocheted pot holders and 325 crocheted headbands. How many items did she sell in all?



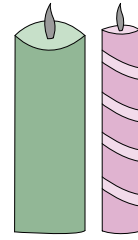
Name : _____

Answer key

Three-Digit Addition


Sheet 1

- 1) Viola, a candle maker produces 200 pillar candles and 250 rolled candles in seven days. How many candles in all does Viola make in a week?



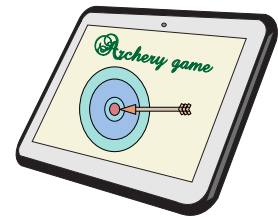
450 candles

- 2) A botanical garden houses 360 Juniper bonsais and 150 Ficus bonsais. How many bonsais in all does the botanical garden shelter?




510 bonsais

- 3) In an online archery game, Joshua scored 800 points and his sister, Janet picked up 635 points. How many points did they accumulate altogether?



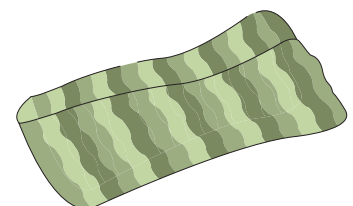
1,435 points

- 4) An animal farm has 451 sheep and 320 goats. How many grazing animals does the farm shelter in all?



771 grazing animals

- 5) Alice made and sold 505 crocheted pot holders and 325 crocheted headbands. How many items did she sell in all?



830 items
