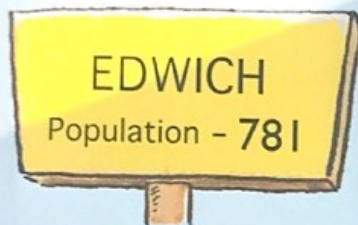
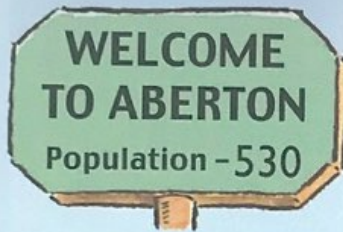


1 How many people, to the **nearest hundred**, live in each of these villages?

(a)



(b)



(c)



2 Write to the **nearest hundred**.

(a) 449

(b) 98


(c) 707

(d) 991

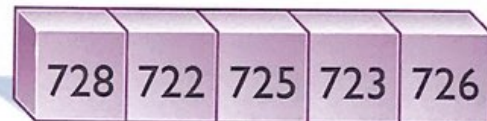
(e) 350

3 List the numbers

(a) nearer to 70 than 80




(b) nearer to 730 than 720.




4 Write the height of each mountain to the **nearest ten metres**.

(a) Snowpeak



(b) Ben Rory



(c) Mount Erin



5 Write to the **nearest ten**.

(a) 119

(b) 751

(c) 604

(d) 555

(e) 997

6 Write each distance from Farnham

(a) to the **nearest hundred miles**(b) to the **nearest ten miles**.

Distances from Farnham

Edwich - 86 miles

Aberton - 264 miles

Oakham - 225 miles