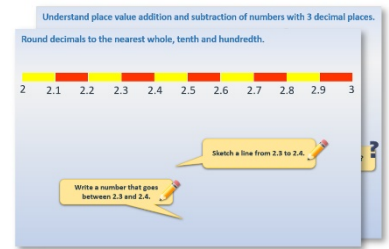


Week 9, Day 4


Find the time half an hour later

Each day covers one maths topic. It should take you about 1 hour or just a little more.

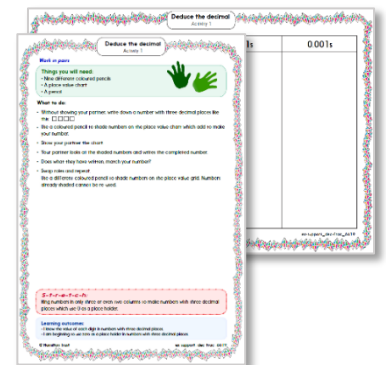
1. Start by reading through the **Learning Reminders**. They come from our *PowerPoint* slides.



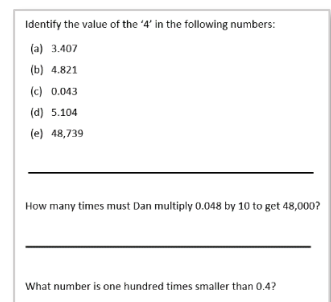
2. Tackle the questions on the **Practice Sheet**. There might be a choice of either **Mild** (easier) or **Hot** (harder)! Check the answers.



3. Finding it tricky? That's OK... have a go with a grown-up at **A Bit Stuck?**



4. Have I mastered the topic? A few questions to **Check your understanding**. Fold the page to hide the answers!



Learning Reminders

Tell the time to the half hour.

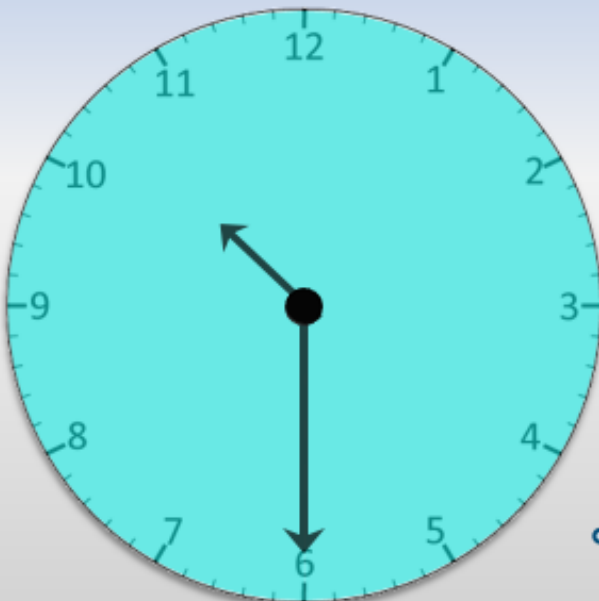


It's **10 o'clock**. How do we know that?

What time will it be half an hour later?



Tell the time to the half hour.



It's **half past 10**. How do we know that?

What time will it be half an hour later?



Learning Reminders

Tell the time to the half hour.




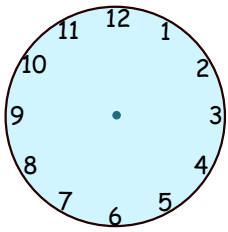
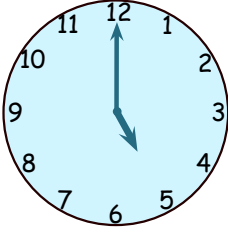
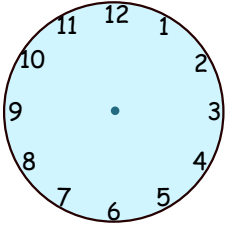
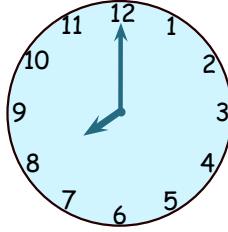
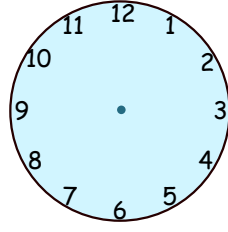
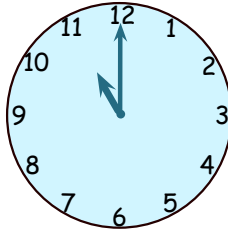
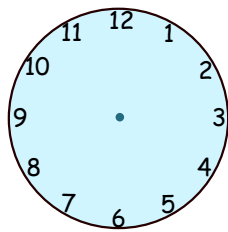
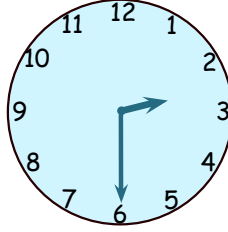
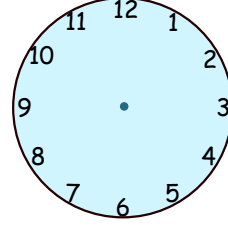
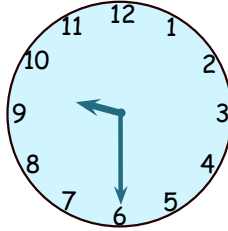
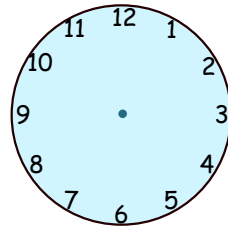
11 o'clock. Carry on counting round in steps of half an hour and think about what you might be doing at those times...

Practice Sheet Mild

Telling the time to the half hour

Look at the times on the clocks.

Show the time half an hour later by drawing the hands.

Time	Half an hour later
	
	
	
	
	
	

Practice Sheet Hot

Telling the time to the half hour

1. Cathie went to the shops at half past 2.
She took half an hour to get there.
What time did she arrive?

2. Sam watched a TV programme at 5 o'clock.
It lasted half an hour.
What time did it finish?

3. Sanjay's lunch break was at 12 o'clock
but he had to queue for half an hour.
When did he get his lunch?

4. The film was meant to start at
half past 4 but it was half an hour late.
What time did it start?

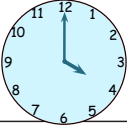
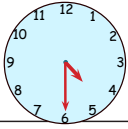
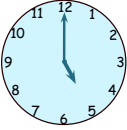

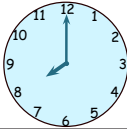
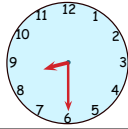
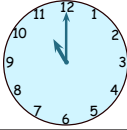
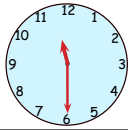
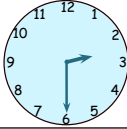
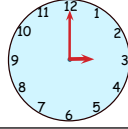
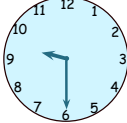
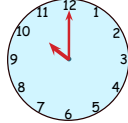
5. Breakfast was ready at half past 9.
The children took half an hour to eat it.
What time did they finish?

6. The car got to the garage at half past
11. It took half an hour to clean the
inside and half an hour to clean the outside.
What time was it ready?

7. Jim got to school at 9 o'clock. His
sister arrived half an hour earlier for
breakfast club. What time did she arrive?

Practice Sheets Answers

Telling the time to the half hour (mild)

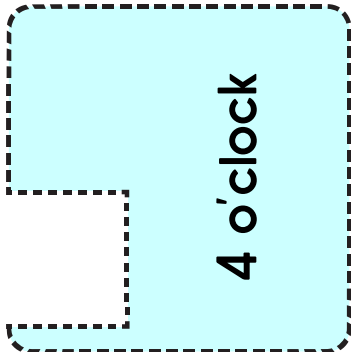
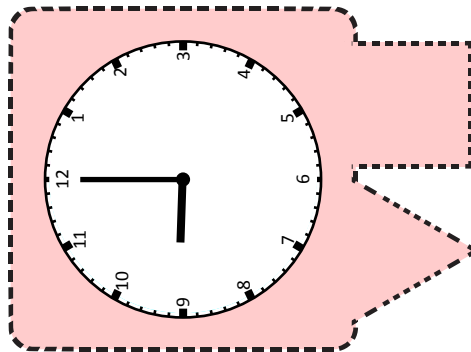

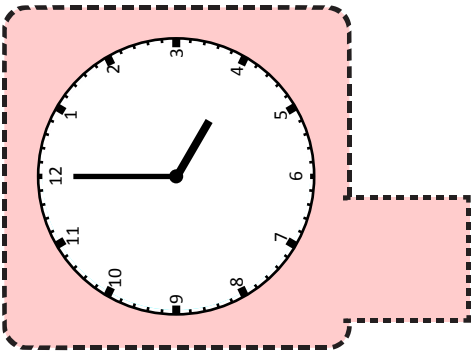

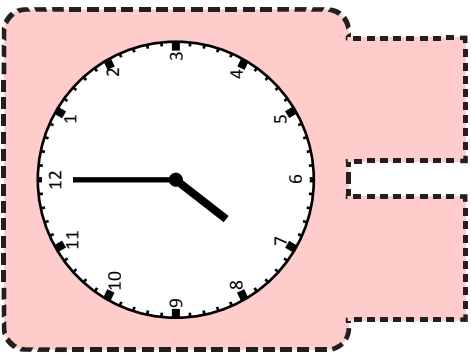

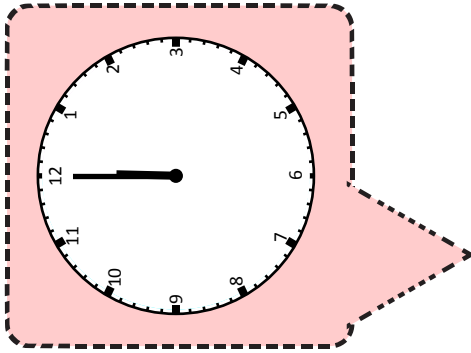
Time	Half an hour later
	
	
	
	
	
	

Telling the time to the half hour (hot)

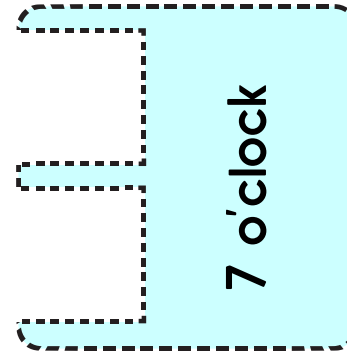
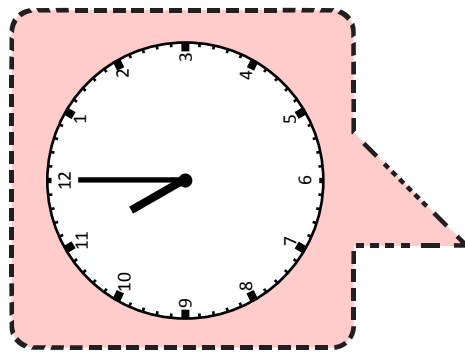
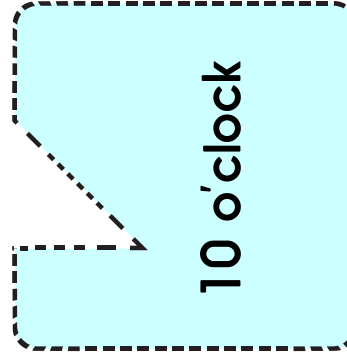
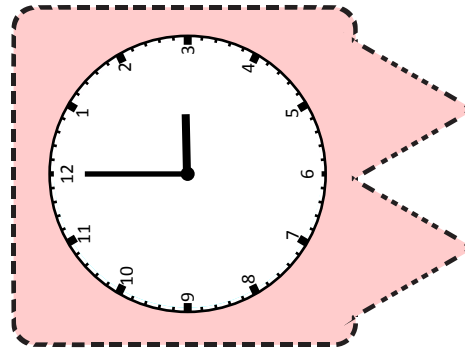
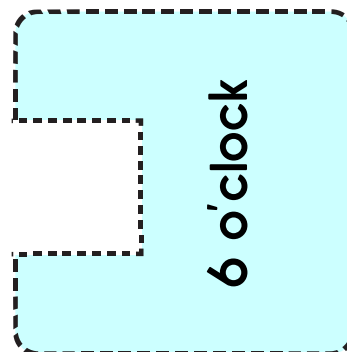
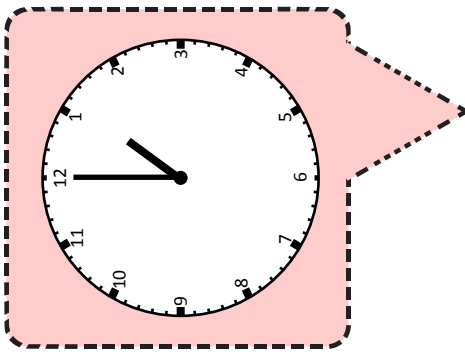
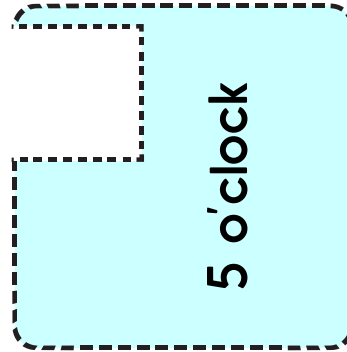
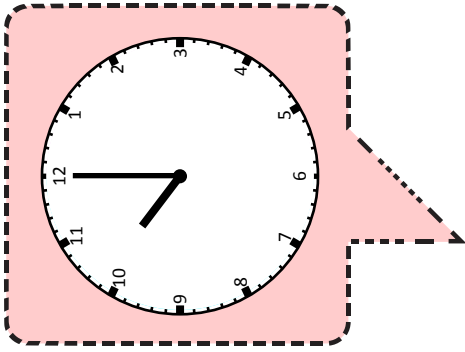
1. 3 o'clock
2. Half past 5
3. Half past 12
4. 5 o'clock
5. 10 o'clock
6. Half past 12
7. Half past 8

A Bit Stuck? Time jigsaws

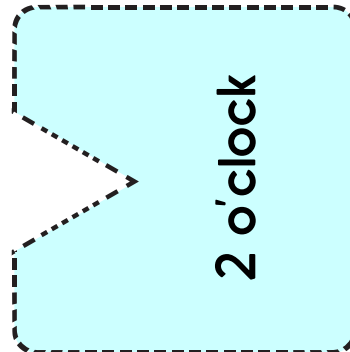
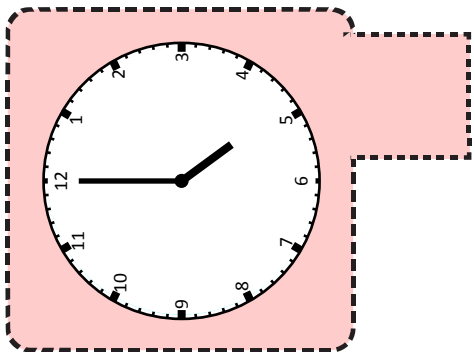
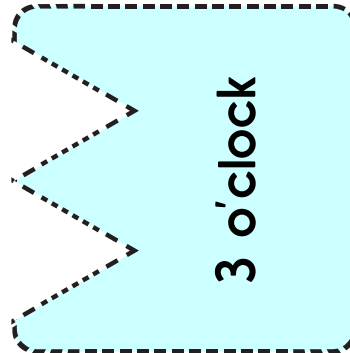
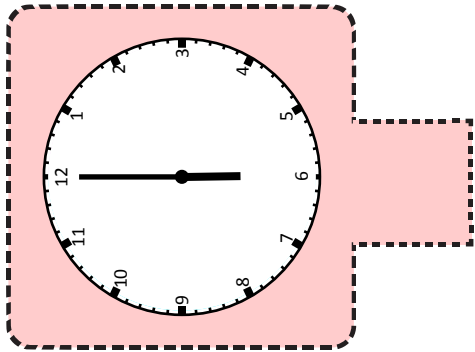
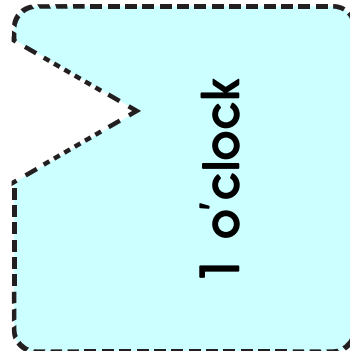
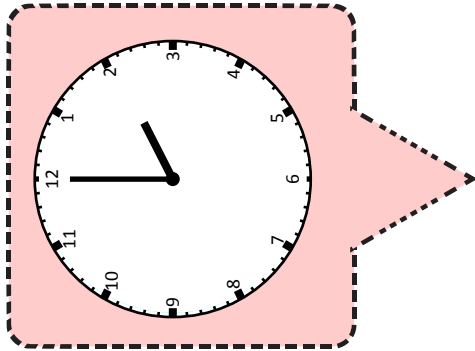

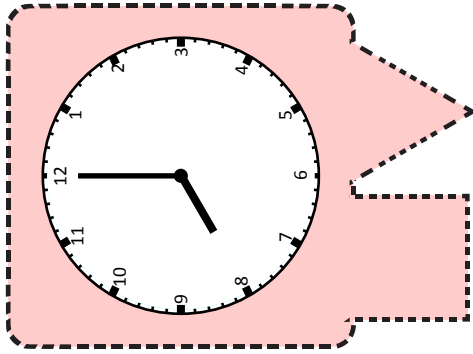
Please print on card and cut out around the dotted lines.



A Bit Stuck?
Time jigsaws



A Bit Stuck? Time jigsaws



Check your understanding

Questions

True or false?

- Half past 5 is half an hour before 6 o'clock.
 - We normally leave school at about half past 3.
 - We normally get to school at 2 o'clock.
 - Half past 12 on the clock has the hour hand pointing straight down and the minute hand pointing straight up.
-

Write the time half an hour after:

- (i) 10 o'clock
- (ii) half past 6
- (iii) 1 o'clock.

Fold here to hide answers

Check your understanding

Answers

True or false?

- Half past 5 is half an hour before 6 o'clock. **True.**
 - We normally leave school at about half past 3. **True (some may leave later due to after school activities so accept false if that applies to your school).**
 - We normally get to school at 2 o'clock. **False – most likely around 9 o'clock.**
 - Half past 12 on the clock has the hour hand pointing straight down and the minute hand pointing straight up. **False – at half past the hour hand is halfway between 12 and 1 - check with a real clock if children are misunderstanding this.**
-

Write the time half an hour after:

- (i) 10 o'clock **Half past 10.**
- (ii) half past 6 **7 o'clock.**
- (iii) 1 o'clock. **Half past 1.**

Again, check with a real clock if children are not understanding this.