

Number, Money and Measure

1. Match the coins.

1p

2p

5p

10p

20p


50p

£1


£2




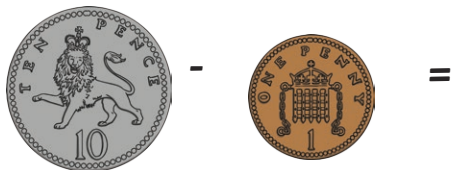
2. What coins would you need?



3. How much altogether?



4. How much is left?



5. How much in each piggy bank?



_____ p



_____ p



_____ p



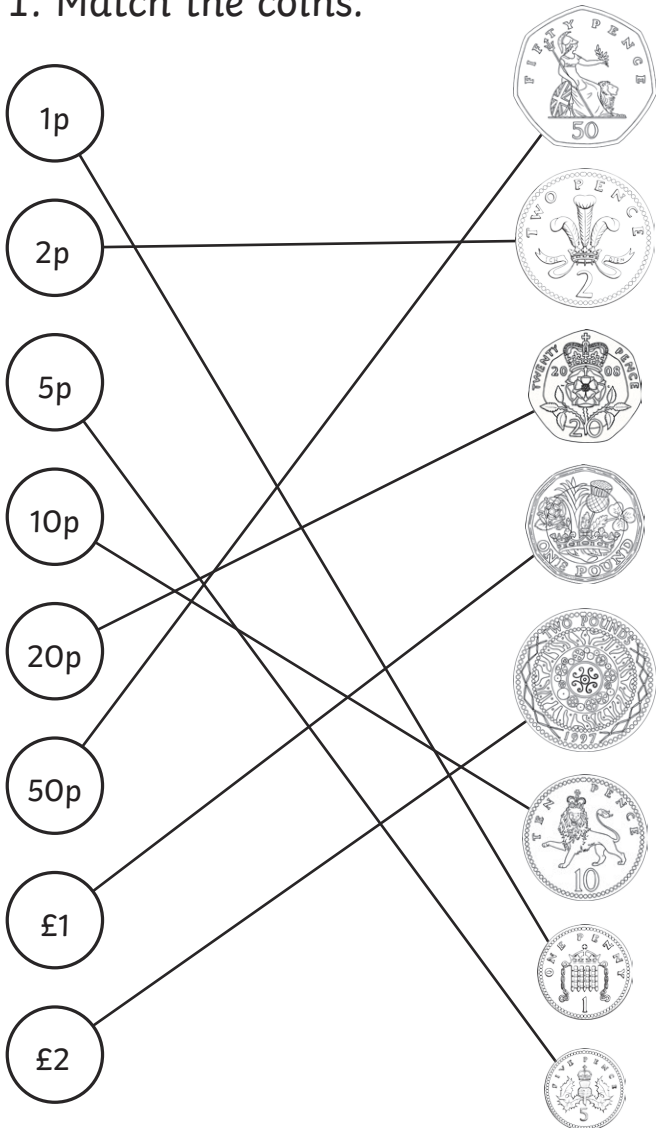
_____ p



_____ p

Number, Money and Measure - Answers

1. Match the coins.



2. What coins would you need?

8p Coins 5p, 2p, 1p

10p Coins 10p

9p Coins 5p, 2p, 1p

19p Coins 6p, 5p, 1p

7p Coins 5p, 2p

3. How much altogether?

$$2p + 5p = 7p$$

$$10p + 5p = 15p$$

$$1p + 2p = 3p$$

$$1p + 5p + 10p = 16p$$

$$2p + 2p + 10p = 14p$$

4. How much is left?

$$10p - 5p = 5p$$

$$10p - 2p = 8p$$

$$10p - 1p = 9p$$

$$5p - 1p = 4p$$

$$5p - 2p = 3p$$

5. How much in each piggy bank?

$$5p, 1p, 1p, 2p = 9p$$

$$2p, 2p, 2p, 1p = 7p$$

$$5p, 2p, 2p, 2p = 11p$$

$$10p, 5p, 1p, 1p = 17p$$

$$5p, 5p, 2p, 2p = 14p$$