




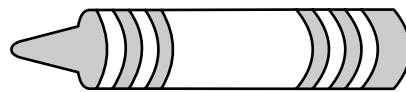
Name: \_\_\_\_\_ Class: \_\_\_\_\_

Measure each object in centimetres.  
Work out the difference in length.

1



\_\_\_\_\_ centimetres




\_\_\_\_\_ centimetres

The pencil is \_\_\_\_\_ centimetre(s) longer than the crayon.

2



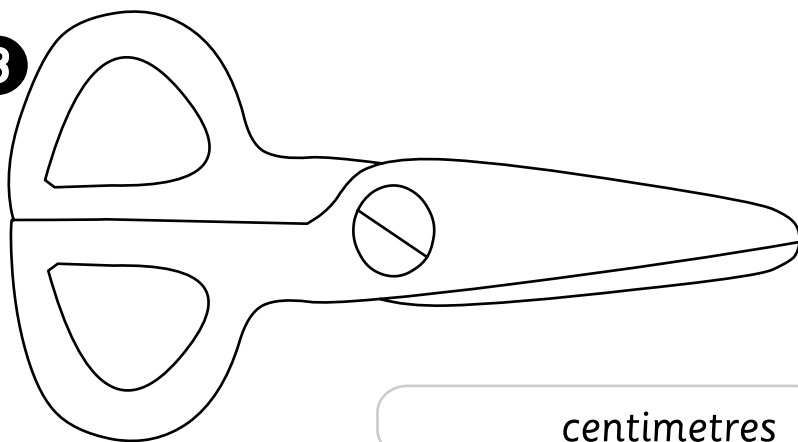
\_\_\_\_\_ centimetres



\_\_\_\_\_ centimetres

The pen is \_\_\_\_\_ centimetre(s) longer than the eraser.

3



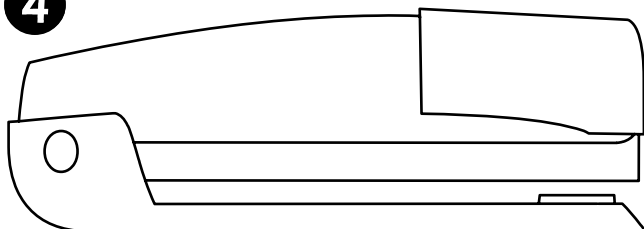
\_\_\_\_\_ centimetres



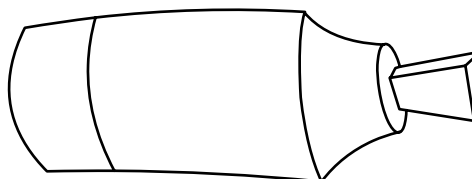
\_\_\_\_\_ centimetres

The scissors are \_\_\_\_\_ centimeters longer than the paperclip.

4



\_\_\_\_\_ centimetres



\_\_\_\_\_ centimetres

The stapler is \_\_\_\_\_ centimetres longer than the marker.

