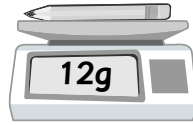
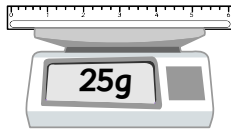




Name: _____ Class: _____

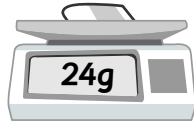
Compare the mass of the objects.

1 How much heavier is the ruler than the pencil?



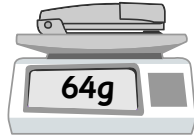
g

2 How much heavier is the rubber than the scissors?



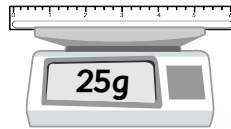
g

3 How much heavier is the stapler than the glue stick?



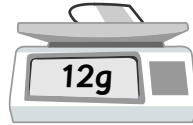
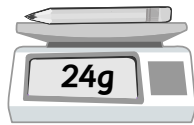
g

4 How much heavier is the glue stick than the ruler?



g

5 How much heavier is the rubber than the pencil?



g

6 How much heavier is Sten's pile of books than Klara's pile?



Klara's



Sten's

kg

7 How much heavier is Rosa's pile of books than Sten's?



Stig's



Rosa's

kg

8 How much heavier is Sten's pile of books than Manu's?



Sten's



Manu's

kg

9 How much heavier is Rosa's pile of books than Klara's?



Rosa's



Klara's

kg

10 How much heavier is Klara's pile of books than Sten's?



Klara's



Sten's

kg

