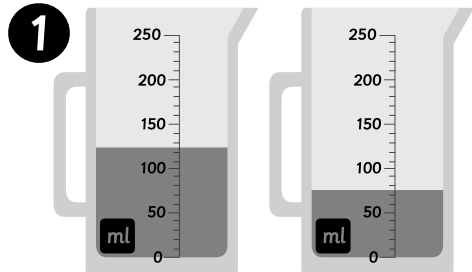




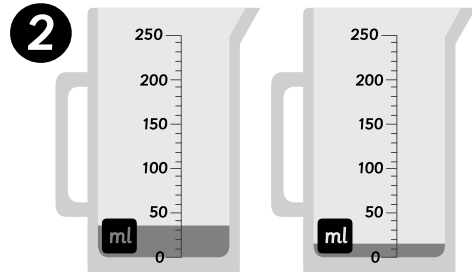
Name: _____ Class: _____

Compare the volume of the liquids.



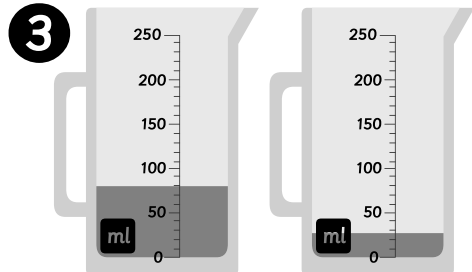
Klara: 125ml Sten: 75ml

ml



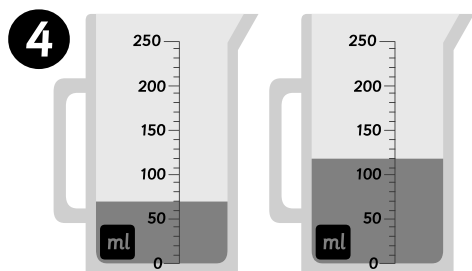
Rosa: 35ml Manu: 15ml

ml



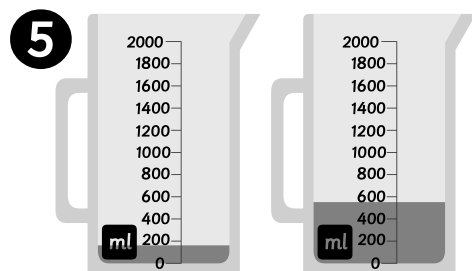
Sten: 80ml Manu: 25ml

ml




Klara: 70ml Rosa: 120ml

ml

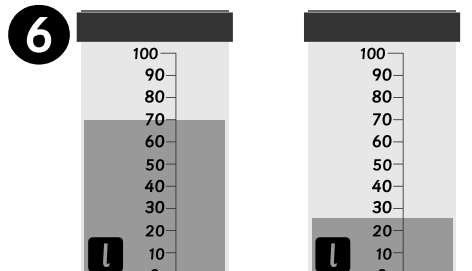


Klara: 145ml Manu: 550ml

ml

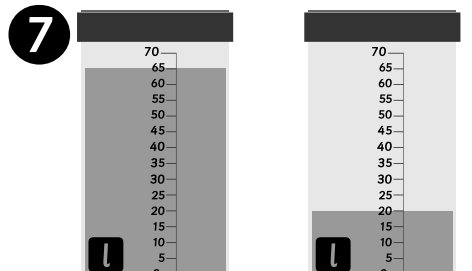


Compare the volume of the liquids.



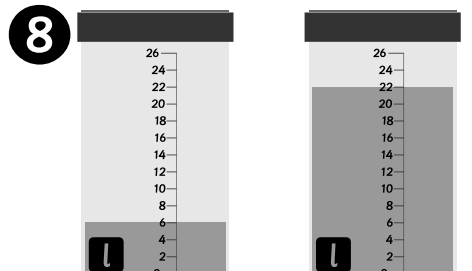
Tank 1: 70 litres Tank 2: 25 litres

l



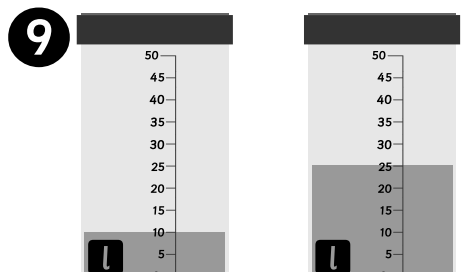
Tank 1: 65 litres Tank 2: 20 litres

l



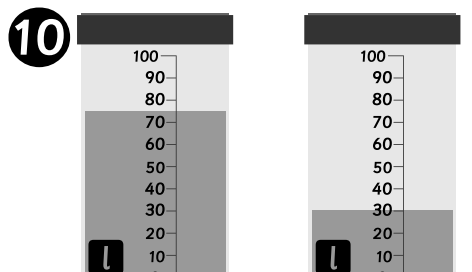
Tank 1: 6 litres Tank 2: 22 litres

l



Tank 1: 10 litres Tank 2: 25 litres

l



Tank 1: 75 litres Tank 2: 30 litres

l

