



Name: _____ Class: _____

Fill in the correct unit of measurement below:

**metres, degrees centigrade, litres, millilitres, centimetres,
kilometres, kilograms, grams**

- 1 The height of a hippopotamus is best measured in:

- 2 The distance from London Zoo to Paris is best measured in:

- 3 The weight of a horse is best measured in:

- 4 The amount of water in a fish tank is best measured in:

- 5 The length of a python is best measured in:

- 6 The temperature of a reptile house is best measured in:

- 7 The amount of water in a rabbit's water bottle is best measured in:


- 8 The weight of a baby meerkat is best measured in:



Name: _____ Class: _____

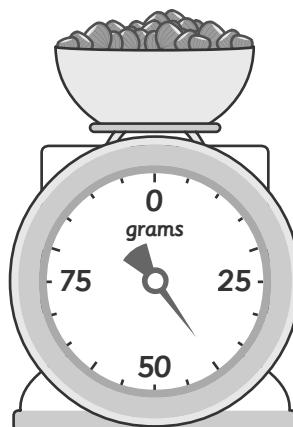
Answer the questions below.

9 How many ml?



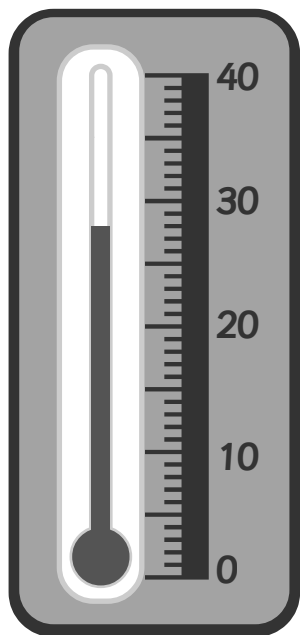
_____ ml

10 How many g?



_____ g

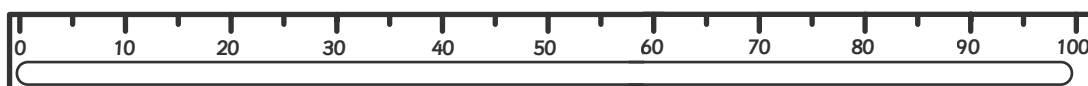
11 What is the temperature in °C?



_____ °C



12 How long is the line in cm?



_____ cm