

### Task 1

First, make a note of the following:

1. How many seconds are in 1 minute.
2. How many minutes are in one hour
3. How many hours are in a day.

Now...

1. How many days are in each week.
2. How many days in each month.
3. How many days are in a year.

You may want to discuss these with an adult to help you figure out the answers. 😊

### Task 2

Complete the worksheet about hours in a day.

**1** Write the times of day in order of when they happen.

afternoon   morning   midnight   midday   evening

**2** Match the description to the correct number.

months in a year	5
days in a week	168
hours in a day	31
days in a non-leap year	7
hours in a week	24
days in a school week	365
maximum number of days in a month	12

**3** Fill in the missing numbers.

a) 1 day = 24 hours

days = 48 hours

4 days =  hours

days = 960 hours

41 days =  hours

b) 1 week = 7 days


2 weeks =  days


weeks = 21 days

60 weeks =  days

63 weeks =  days

**4** Aisha arrives home at 11 o'clock.

 It must be nearly lunchtime.

 It must be dark outside.

Who do you agree with? Explain your answer.


**5** There are 5 days in a school week.

a) What is the difference in the number of days in 4 school weeks compared to 4 whole weeks?

b) There are 7 hours in a school day. How many more hours are there in 5 full days than 5 school days?

Talk to a partner about how you worked out your answers.

**6** Kim and Dexter are working out how many more hours are in the month of August than September.

 I can work out how many hours are in August in total, how many hours are in September in total and subtract one from the other.

Kim thinks there is an easier way of working it out. What might Kim's method be? Talk about it with a partner.