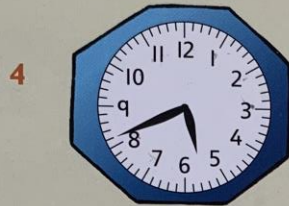




Reading the time

T1.5c

Write the time for each clock using 'past' or 'to'.

1. 27 minutes past 2



Write the digital time to match each clock.

1. 2:27

Write these digital times:

6. 7:55

6 10 minutes later than



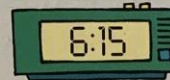
7 10 minutes earlier than



8 20 minutes later than




9 20 minutes earlier than



10 25 minutes earlier than



11 15 minutes earlier than



Write the time you wake up. Write the time you go to sleep. How long are you awake? How long are you asleep?



I can read and write the time using minutes

Challenge

Solve these problems.

- 1 Josh turned on the TV at 4:26 pm and turned it off at 5:00 pm. How many minutes was the TV on for?
- 2 A film started at 7:02 pm and finished at 8:56 pm. Exactly how long was the film?
- 3 Cartoons started at 4:50 pm and were on for 30 minutes. When did they end?
- 4 The news began at 6:05 pm and finished at 6:51 pm. How many minutes was it on for?
- 5 The football match on TV lasted for 90 minutes and there was a 15 minute break at half-time. It began at 7:45 pm. What time did it finish?
- 6

1. 34 minutes

