


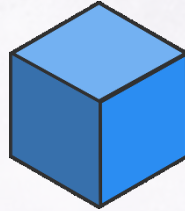
# 3D Shape Activities



# Guess the 3D Shape



?



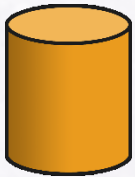
?




?



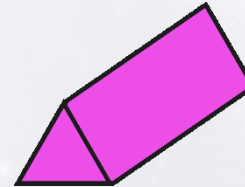
?



?



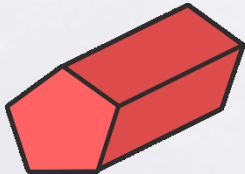
?



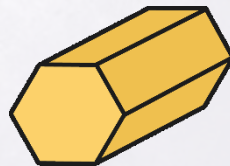
?



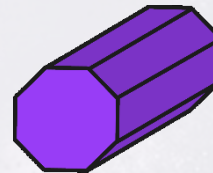
?



?



?

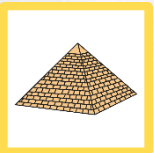



?



?

cube	cuboid	sphere
cylinder	square-based pyramid	cone



# Shape Properties

square-based  
pyramid

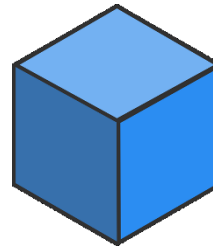


edges:

faces:

vertices:

cube



edges:

faces:

vertices:

cuboid




edges:

faces:

vertices:

cone




edges:

faces:

vertices:

# Shape Properties

sphere




edges:

faces:

vertices:

cylinder

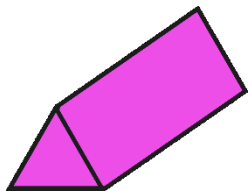


edges:

faces:

vertices:

triangular prism

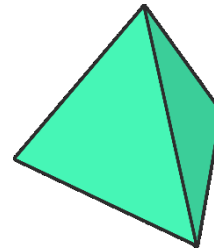


edges:

faces:

vertices:

tetrahedron



edges:

faces:

vertices:

cylinder	cuboid	cone	square-based pyramid	cube

