













Which Fraction Is Greater?

Insert $<$, $>$ or $=$ to make the answer correct.




1. $\frac{1}{2}$ of 10 $\frac{1}{2}$ of 12
 
2. $\frac{1}{2}$ of 8 $\frac{1}{4}$ of 12
 
3. $\frac{1}{2}$ of 12 $\frac{1}{4}$ of 16
 
4. $\frac{1}{2}$ of 10 $\frac{1}{4}$ of 20
 
5. $\frac{1}{4}$ of 20 $\frac{1}{2}$ of 12
 

Which Fraction Is Greater? **Answers**

1. $\frac{1}{2}$ of 10 $\frac{1}{2}$ of 12




2. $\frac{1}{2}$ of 8 $\frac{1}{4}$ of 12




3. $\frac{1}{2}$ of 12 $\frac{1}{4}$ of 16

4. $\frac{1}{2}$ of 10 $\frac{1}{4}$ of 20











  

5. $\frac{1}{4}$ of 20 $\frac{1}{2}$ of 12




Which Fraction Is Greater?

Insert $<$, $>$ or $=$ to make the answer correct.

1. $\frac{1}{2}$ of 8 $\frac{1}{4}$ of 12
 
2. $\frac{1}{4}$ of 8 $\frac{1}{2}$ of 6
 
3. $\frac{1}{2}$ of 12 $\frac{1}{4}$ of 24
 
4. $\frac{1}{2}$ of 10 $\frac{1}{4}$ of 16
 
5. $\frac{1}{4}$ of 20 $\frac{1}{2}$ of 14
 

Which Fraction Is Greater? **Answers**




1. $\frac{1}{2}$ of 8 $\frac{1}{4}$ of 12

2. $\frac{1}{4}$ of 8 $\frac{1}{2}$ of 6




3. $\frac{1}{2}$ of 12 $\frac{1}{4}$ of 24

4. $\frac{1}{2}$ of 10 $\frac{1}{4}$ of 16



5. $\frac{1}{4}$ of 20 $\frac{1}{2}$ of 14



Which Fraction Is Greater?

Insert $<$, $>$ or $=$ to make the answer correct.



1. $\frac{1}{2}$ of 10 $\frac{1}{4}$ of 20



2. $\frac{1}{4}$ of 28 $\frac{1}{2}$ of 18



3. $\frac{1}{2}$ of 12 $\frac{1}{4}$ of 20

4. $\frac{1}{2}$ of 8 $\frac{1}{4}$ of 16




 

5. $\frac{1}{4}$ of 40 $\frac{1}{2}$ of 16




 

Which Fraction Is Greater? **Answers**




1. $\frac{1}{2}$ of 10 $\frac{1}{4}$ of 20




2. $\frac{1}{4}$ of 28 $\frac{1}{2}$ of 18

3. $\frac{1}{2}$ of 12 $\frac{1}{4}$ of 20

4. $\frac{1}{2}$ of 8 $\frac{1}{4}$ of 16

5. $\frac{1}{4}$ of 40 $\frac{1}{2}$ of 16

