

What Fraction Is Shaded?

Challenge Cards

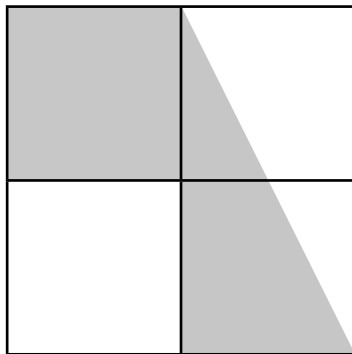


1. What fraction is shaded?



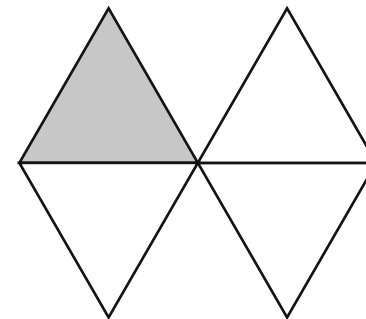
Explain your answer.

2. What fraction is shaded?



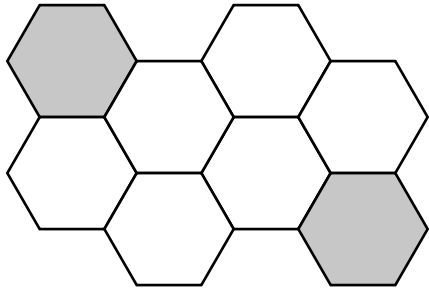
Explain your answer.

3. What fraction is shaded?



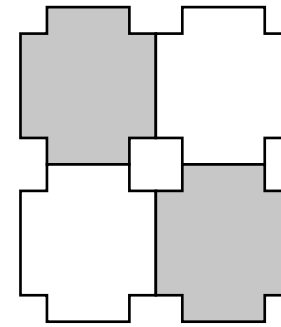
Explain your answer.

4. What fraction is shaded?



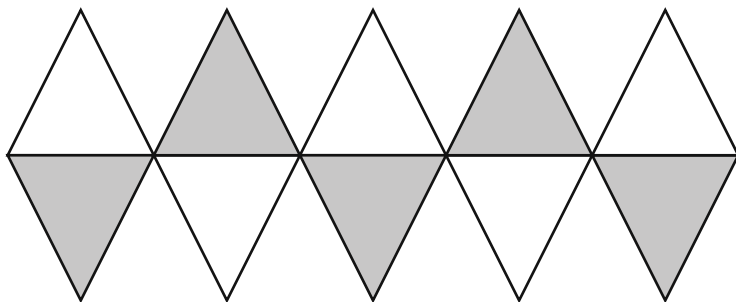
Explain your answer.

5. What fraction is shaded?



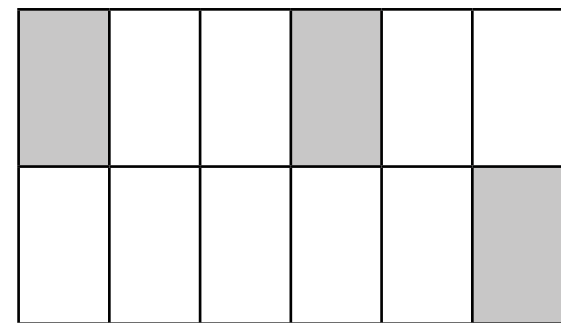
Explain your answer.

6. What fraction is shaded?



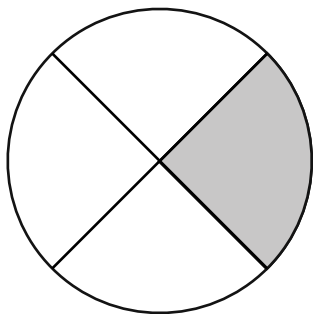
Explain your answer.

7. What fraction is shaded?




Explain your answer.

8. What fraction is shaded?



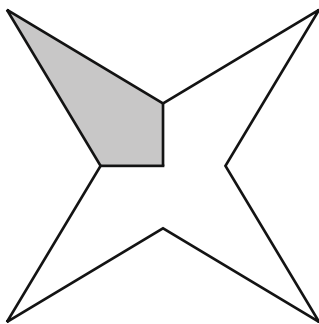
Explain your answer.

9. What fraction is shaded?



Explain your answer.

10. What fraction is shaded?



Explain your answer.

What Fraction Is Shaded? **Answers**

1. $\frac{1}{2}$

2. $\frac{1}{2}$

3. $\frac{1}{4}$

4. $\frac{1}{4}$

5. $\frac{1}{2}$

6. $\frac{1}{2}$

7. $\frac{1}{4}$

8. $\frac{1}{4}$

9. $\frac{1}{2}$

10. $\frac{1}{4}$