










# Change From 10p and 20p

Name \_\_\_\_\_

Find the correct change. Show your working out each time.

 <input type="text"/> p      9p	 <input type="text"/> 7p	 <input type="text"/> 6p
 <input type="text"/> 4p	 <input type="text"/> 2p	 <input type="text"/> 18p
 <input type="text"/> 15p	 <input type="text"/> 12p	 <input type="text"/> 10p

Now try these:

$10 - 3 = \square$

$10 - 5 = \square$

$10 - 9 = \square$

$20 - 4 = \square$

$20 - 7 = \square$

$20 - 6 = \square$