


Money Totals (Y1)

Name _____

Count the coins then draw the coins needed to make the amounts.



15p




19p




25p



27p



30p



32p



38p