

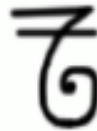


# Harry Potter Challenge

## 1. Money

# Imagine you are a Goblin at Gringotts Bank.....



Symbols:

-  — Galleon
-  — Sickle
-  — Knut



Knut

Sickle

Galleon

There 17 Knuts in a Sickle, and 29 Sickles in a Galleon.


Q How many Knuts are there in a Galleon?

Tip: What calculation will we need to do?:

Harry Potter



Imagine you are a Goblin at Gringotts Bank.....



1 Galleon = 29 Sickles

1 Galleon = ? Knuts

1 Sickle = 17 knuts



**Main Task:** Who has the most amount of knuts in their vault? How many Vaults can you calculate – show your working out carefully!

*Activity sheet in 'Movie Week' folder called 1 Harry Potter - Money required.*