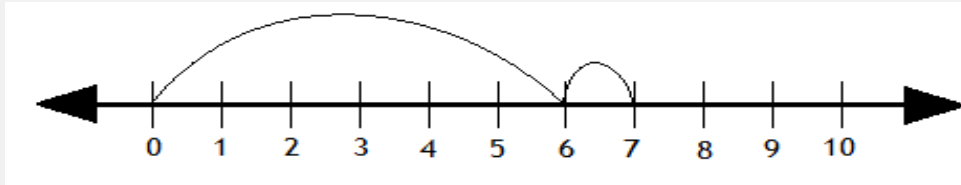


Adding with number lines

Grade 1 Addition Worksheet

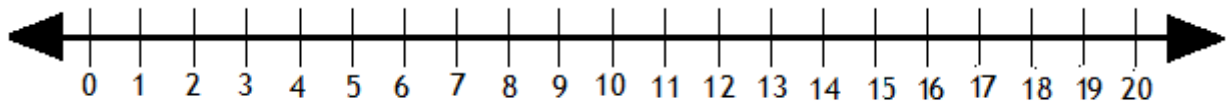
Solve the following by drawing hops on the number line.

Example:



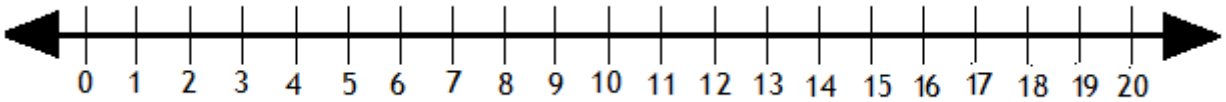
$$6 + 1 = \boxed{7}$$

1.



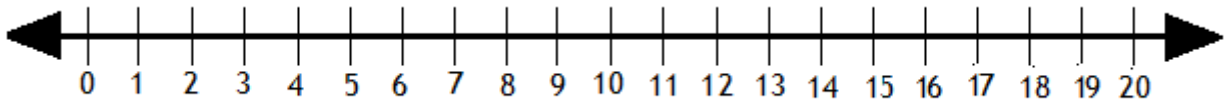
$$5 + 12 = \boxed{}$$

2.



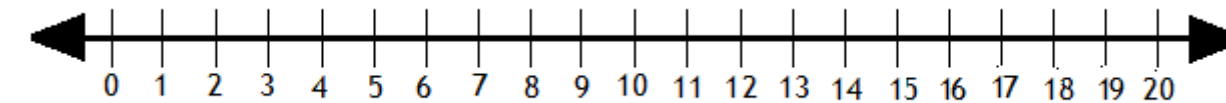
$$10 + 4 = \boxed{}$$

3.



$$3 + 8 = \boxed{}$$

4.



$$7 + 10 = \boxed{}$$