


# Addition with Money

Find the total cost of the items below. Use the space to show your working.

1.



Total price = \_\_\_\_\_

2.



Total price = \_\_\_\_\_

3.



Total price = \_\_\_\_\_

4.



Total price = \_\_\_\_\_


5.



Total price = \_\_\_\_\_

# Addition with Money


Find the total cost of the items below. Use the space to show your working.



Total price = \_\_\_\_\_




Total price = \_\_\_\_\_



Total price = \_\_\_\_\_



Total price = \_\_\_\_\_



Total price = \_\_\_\_\_

# Addition with Money

Find the total cost of the items below. You will find the price of each item from the Grocery Store Price List. Use the space to show your working.

## Grocery Store Price List:

apple 50p

box of peaches £2

eggs £2.50

banana 40p

pack of tomatoes 90p

spaghetti £2.30

carrot 50p

milk £2.80

pepper 60p

pineapple £1.50


cheese £2.90

rice £3.60

pack of strawberries 80p

chocolate £3.10

1.




Total price = \_\_\_\_\_

2.



Total price = \_\_\_\_\_

3.



Total price = \_\_\_\_\_

4.




Total price = \_\_\_\_\_

5.



Total price = \_\_\_\_\_

6.



Total price = \_\_\_\_\_

# Addition with Money

Find the total cost of the items below. You will find the price of each item from the Grocery Store Price List. Use the space to show your working.

## Grocery Store Price List:

apple 50p

box of Peaches £2

eggs £2.50

banana 40p

pack of Tomatoes 90p

spaghetti £2.30

carrot 50p

milk £2.80

pepper 60P

pineapple £1.50

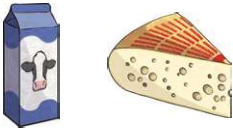
cheese £2.90

rice £3.60

pack of strawberries 80p

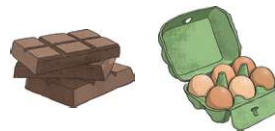
chocolate £3.10

7.



Total price = \_\_\_\_\_

8.



Total price = \_\_\_\_\_

9.



Total price = \_\_\_\_\_

10.



Total price = \_\_\_\_\_

11.



Total price = \_\_\_\_\_

12.



Total price = \_\_\_\_\_

# Addition with Money

Find the total cost of the items below. You will find the price of each item from the Grocery Store Price List. Use the space to show your working.

## Grocery Store Price List:

apple 53p

pack of tomatoes 78p

pepper 60p

banana 41p

milk £2.81

rice £3.65

carrot 59p

cheese £2.92

tuna £5.65

pineapple £1.52

chocolate £3.10

bacon £1.82


pack of strawberries 84p

eggs £1.24

box of peaches £1.32

spaghetti £2.38

1.




Total price = \_\_\_\_\_

2.



Total price = \_\_\_\_\_

3.



Total price = \_\_\_\_\_

4.




Total price = \_\_\_\_\_

5.



Total price = \_\_\_\_\_


6.




Total price = \_\_\_\_\_

# Addition with Money


Find the total cost of the items below. You will find the price of each item from the Grocery Store Price List. Use the space to show your working.

7. 


Total price = \_\_\_\_\_

8. 


Total price = \_\_\_\_\_

9. 


Total price = \_\_\_\_\_

10. 

Total price = \_\_\_\_\_

11. 

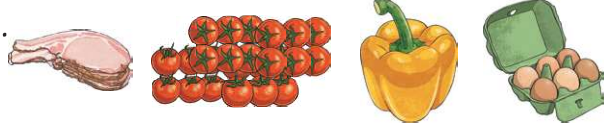
Total price = \_\_\_\_\_

12. 

Total price = \_\_\_\_\_

13. 

Total price = \_\_\_\_\_

14. 

Total price = \_\_\_\_\_



# Addition with Money

**Challenge:** Find the cost for each recipe using the items in the Grocery Store Price List.

Recipe 1: Fruit Salad

Ingredients:



Total price = \_\_\_\_\_

Recipe 2: Creamy vegetable pasta

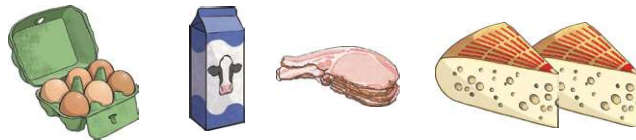
Ingredients:



Total price = \_\_\_\_\_

Recipe 3: Omelette

Ingredients:



Total price = \_\_\_\_\_