

Fractions and Ordering

Order these fractions from the smallest.

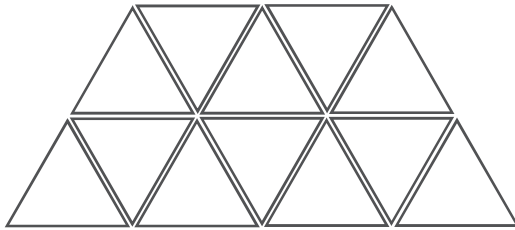
$$\frac{9}{18} \quad \frac{1}{9} \quad \frac{5}{9} \quad \frac{1}{3} \quad \frac{8}{9}$$

Order these fractions from the biggest.

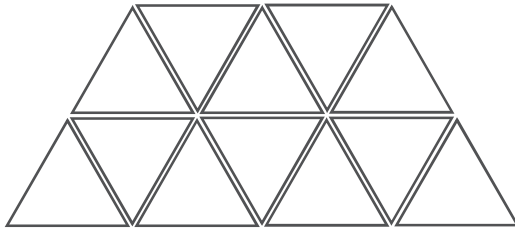
$$\frac{4}{15} \quad \frac{9}{15} \quad \frac{1}{5} \quad \frac{4}{5} \quad \frac{11}{15}$$

Colour the boxes according to its fraction. Which fraction is greater?

$$\frac{7}{12}$$

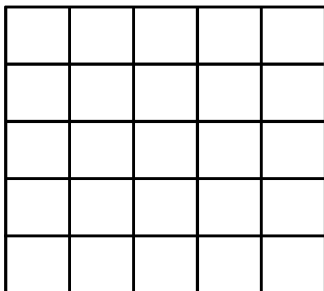


$$\frac{3}{4}$$

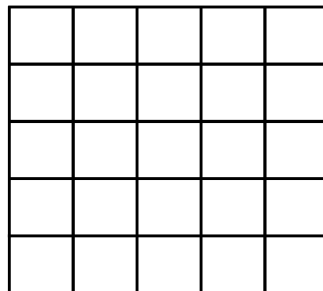


_____ is the greater fraction.

$$\frac{17}{25}$$



$$\frac{4}{5}$$



_____ is the greater fraction.