


5. It is 36 miles from my home town to Edinburgh by train.

The train broke down when I was only

$\frac{1}{4}$ way along the journey.

- a How far had I travelled ?
- b How far was I then from Edinburgh ?




6. Lucy's mum got a bunch of 30 flowers from her dad on her birthday.

$\frac{1}{5}$ of them were red roses.

How many red roses were there ?



7.



Most people sleep for about $\frac{1}{3}$ of each day.

How many hours is this ?


8. Draw this rectangle (24 squares) on squared paper.

a What is $\frac{1}{6}$ of 24 ?

b Colour $\frac{1}{6}$ of the rectangle red.

c Colour $\frac{1}{8}$ of it blue and $\frac{1}{4}$ of it yellow.

d How many of the 24 squares are not coloured at all ?




9. a How many days are there in June ?

b It rained on $\frac{1}{6}$ of these days.

How many days was this ?

c I was on holiday for $\frac{1}{3}$ of June. For how long was I on holiday ?



10. A problem :- Of the money I had in my pocket, I spent $\frac{1}{6}$ of it on sweets.

The sweets cost 9 pence.

a How much money must I have had to begin with ?

b How much money will I then have left ?

