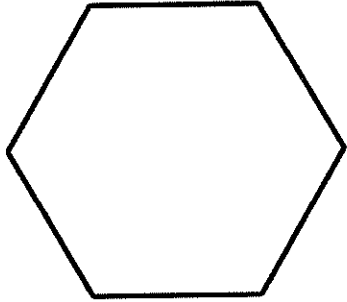


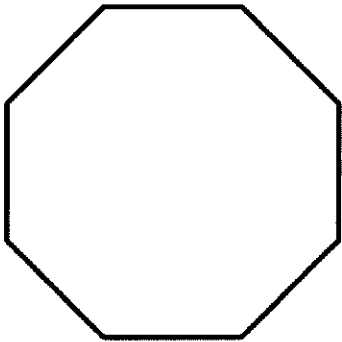
Properties of 2D Shapes

Write down the properties of the shapes.



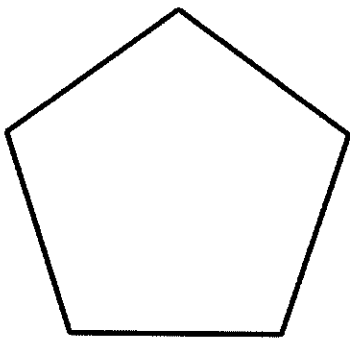
A hexagon has ____ sides.

A hexagon has ____ corners.




An octagon has ____ sides.

A octagon has ____ corners.



A pentagon has ____ sides.

A pentagon has ____ corners.



A circle has ____ side.

A circle has ____ corners.